


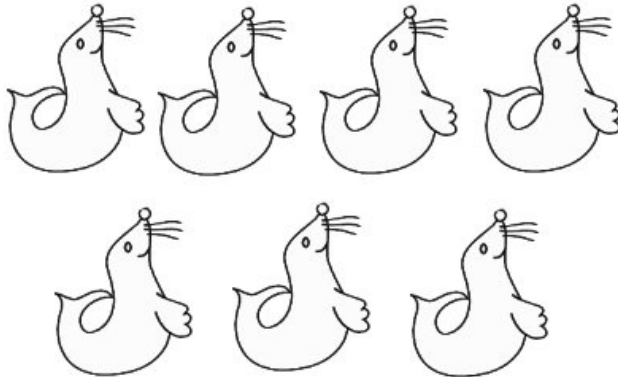
Zoo Addition



How many   altogether?

$$2 + 3 = \underline{5}$$


1.



How many   in all?

$$4 + 3 = \underline{\quad}$$


2.




How many   altogether?

$$4 + 4 = \underline{\quad}$$


3.



How many   altogether?

$$4 + 5 = \underline{\quad}$$


4.




How many   in all?


$$3 + 3 = \underline{\quad}$$

Zoo Addition




How many  altogether?

$$\underline{3} + \underline{3} = \underline{6}$$




How many  in all?

$$\underline{\quad} + \underline{\quad} = \underline{\quad}$$




How many  altogether?

$$\underline{\quad} + \underline{\quad} = \underline{\quad}$$



How many  altogether?

$$\underline{\quad} + \underline{\quad} = \underline{\quad}$$




How many  in all?



$$\underline{\quad} + \underline{\quad} = \underline{\quad}$$

Name _____


Zoo Addition Worksheet 1
Item 3599


Zoo Addition





How many   altogether?


$2 + 3 = \underline{5}$





1. 


How many   in all?



$4 + 3 = \underline{7}$

2. 


How many   altogether?



$4 + 4 = \underline{8}$

3. 

How many   altogether?

$4 + 5 = \underline{9}$

4. 

How many   in all?


$3 + 3 = \underline{6}$



Copyright ©2012 T. Smith Publishing. All rights reserved. www.tlsbooks.com
Graphics ©2012 Jupiterimages.

Name _____


Zoo Addition Worksheet 2
Item 3599b


Zoo Addition





How many   altogether?


$3 + 3 = \underline{6}$





1. 


How many   in all?



$5 + 3 = \underline{8}$

2. 


How many   altogether?



$3 + 2 = \underline{5}$

3. 

How many   altogether?

$5 + 5 = \underline{10}$

4. 

How many   in all?

$4 + 2 = \underline{6}$

Copyright ©2012 T. Smith Publishing. All rights reserved. www.tlsbooks.com
Graphics ©2012 Jupiterimages.