


Time Calculations

Worksheet 1

Review each sentence and solve the problem.


1. Sara started a test at 2:00 P.M. The test ended at 2:30 P.M. How long was the test?



2. Look at the clock shown on the right. What time will it be in 45 minutes? Write your answer with a colon (for example, 4:25).



3. Look at the clock shown on the right. What time was it 20 minutes ago? Write your answer with a colon (for example, 4:25).



4. Sandra rode her bike home from school. She got home at 3:40 P.M. Sandra got out of school at 3:00 P.M. How long did it take Sandra to ride home from school?




Time Calculations

Worksheet 2

Review each sentence and solve the problem.

1. Look at the clock shown on the right. What time will it be in 25 minutes? Write your answer with a colon (for example, 2:25).



2. Miss Jones's class took a bus on a field trip to the museum. The bus left at 9:30 A.M. and arrived at the museum at 10:15 A.M. How long did it take for the bus to travel from school to the museum?



3. Look at the clock shown on the right. What time was it 45 minutes ago? Write your answer with a colon (for example, 4:25).



4. Look at the clock shown on the right. What time will it be in 1 hour and 15 minutes? Write your answer with a colon (for example, 4:25).



Time Calculations Worksheet 1
Item 1323-1

Time Calculations
Worksheet 1

Review each sentence and solve the problem.

1. Sara started a test at 2:00 P.M. The test ended at 2:30 P.M. How long was the test?

30 minutes



2. Look at the clock shown on the right. What time will it be in 45 minutes? Write your answer with a colon (for example, 4:25).

2:05



3. Look at the clock shown on the right. What time was it 20 minutes ago? Write your answer with a colon (for example, 4:25).

9:10



4. Sandra rode her bike home from school. She got home at 3:40 P.M. Sandra got out of school at 3:00 P.M. How long did it take Sandra to ride home from school?

40 minutes



Time Calculations Worksheet 2
Item 1323-2

Time Calculations
Worksheet 2

Review each sentence and solve the problem.

1. Look at the clock shown on the right. What time will it be in 25 minutes? Write your answer with a colon (for example, 2:25).

8:55



2. Miss Jones's class took a bus on a field trip to the museum. The bus left at 9:30 A.M. and arrived at the museum at 10:15 A.M. How long did it take for the bus to travel from school to the museum?

45 minutes



3. Look at the clock shown on the right. What time was it 45 minutes ago? Write your answer with a colon (for example, 4:25).

9:25



4. Look at the clock shown on the right. What time will it be in 1 hour and 15 minutes? Write your answer with a colon (for example, 4:25).

11:25

