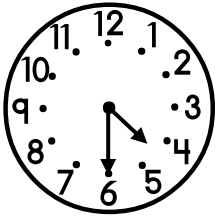





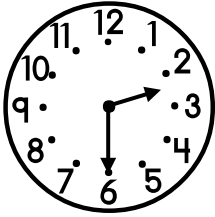
Write the time shown on each analog clock.




4:30



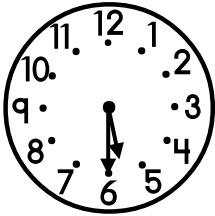
____ : ____




____ : ____



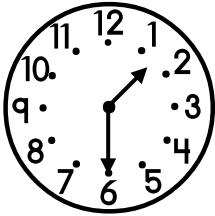
____ : ____




____ : ____



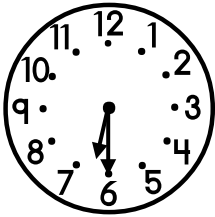
____ : ____




____ : ____



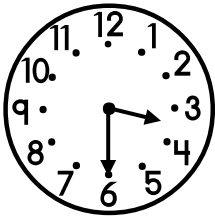
____ : ____




____ : ____



____ : ____



____ : ____

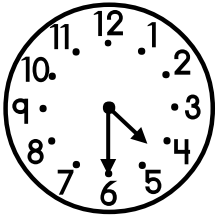


____ : ____


Skill: reading and writing time on the half-hour, analog clock.



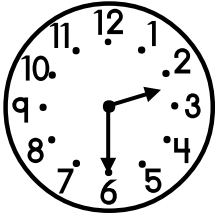
Write the time shown on each analog clock.




4:30



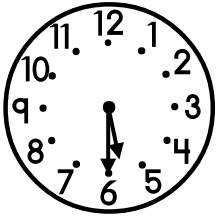
9:30




2:30



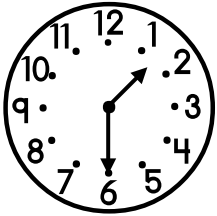
8:30




5:30



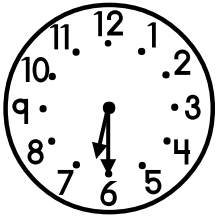
7:30




1:30



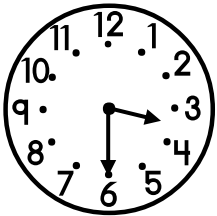
11:30




6:30



10:30



3:30



12:30

Skill: reading and writing time on the half-hour, analog clock.