









# St. Patrick's Day Subtraction

Help Mr. Green find the answers to the subtraction problems. Subtract and write the difference in the shamrock below each problem.

$$\begin{array}{r} 8 \\ - 4 \\ \hline \end{array}$$

$$\begin{array}{r} 7 \\ - 3 \\ \hline \end{array}$$

$$\begin{array}{r} 5 \\ - 3 \\ \hline \end{array}$$

$$\begin{array}{r} 6 \\ - 5 \\ \hline \end{array}$$

$$\begin{array}{r} 9 \\ - 3 \\ \hline \end{array}$$

$$\begin{array}{r} 3 \\ - 2 \\ \hline \end{array}$$

$$\begin{array}{r} 9 \\ - 8 \\ \hline \end{array}$$

$$\begin{array}{r} 6 \\ - 4 \\ \hline \end{array}$$


$$\begin{array}{r} 8 \\ - 5 \\ \hline \end{array}$$

$$\begin{array}{r} 4 \\ - 3 \\ \hline \end{array}$$

$$\begin{array}{r} 8 \\ - 2 \\ \hline \end{array}$$




$$\begin{array}{r} 7 \\ - 6 \\ \hline \end{array}$$

$$\begin{array}{r} 5 \\ - 4 \\ \hline \end{array}$$

$$\begin{array}{r} 4 \\ - 2 \\ \hline \end{array}$$


$$\begin{array}{r} 7 \\ - 4 \\ \hline \end{array}$$

$$\begin{array}{r} 5 \\ - 2 \\ \hline \end{array}$$

$$\begin{array}{r} 9 \\ - 7 \\ \hline \end{array}$$


$$\begin{array}{r} 7 \\ - 2 \\ \hline \end{array}$$

$$\begin{array}{r} 9 \\ - 2 \\ \hline \end{array}$$

$$\begin{array}{r} 9 \\ - 8 \\ \hline \end{array}$$



# St. Patrick's Day Subtraction


Help Mr. Green find the answers to the subtraction problems. Subtract and write the difference in the shamrock below each problem.

$$\begin{array}{r} 8 \\ - 4 \\ \hline \end{array}$$


$$\begin{array}{r} 7 \\ - 3 \\ \hline \end{array}$$



$$\begin{array}{r} 5 \\ - 3 \\ \hline \end{array}$$



$$\begin{array}{r} 6 \\ - 5 \\ \hline \end{array}$$



$$\begin{array}{r} 9 \\ - 3 \\ \hline \end{array}$$


$$\begin{array}{r} 3 \\ - 2 \\ \hline \end{array}$$



$$\begin{array}{r} 9 \\ - 8 \\ \hline \end{array}$$



$$\begin{array}{r} 6 \\ - 4 \\ \hline \end{array}$$



$$\begin{array}{r} 8 \\ - 5 \\ \hline \end{array}$$



$$\begin{array}{r} 4 \\ - 3 \\ \hline \end{array}$$



$$\begin{array}{r} 8 \\ - 2 \\ \hline \end{array}$$


$$\begin{array}{r} 7 \\ - 6 \\ \hline \end{array}$$


$$\begin{array}{r} 5 \\ - 4 \\ \hline \end{array}$$



$$\begin{array}{r} 4 \\ - 2 \\ \hline \end{array}$$


$$\begin{array}{r} 7 \\ - 4 \\ \hline \end{array}$$


$$\begin{array}{r} 5 \\ - 2 \\ \hline \end{array}$$


$$\begin{array}{r} 9 \\ - 7 \\ \hline \end{array}$$


$$\begin{array}{r} 7 \\ - 2 \\ \hline \end{array}$$


$$\begin{array}{r} 9 \\ - 2 \\ \hline \end{array}$$


$$\begin{array}{r} 9 \\ - 8 \\ \hline \end{array}$$
