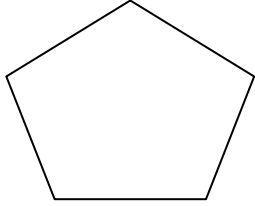


Sides and Vertices

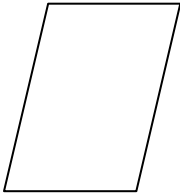
Worksheet 1

Answer the questions below.



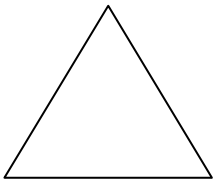
How many vertices does this shape have? _____

How many sides does this shape have? _____



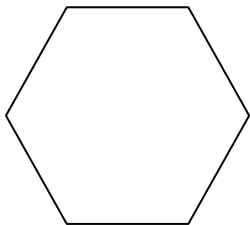
How many vertices does this shape have? _____

How many sides does this shape have? _____




How many vertices does this shape have? _____

How many sides does this shape have? _____



How many vertices does this shape have? _____

How many sides does this shape have? _____




How many vertices does this shape have? _____

How many sides does this shape have? _____

Sides and Vertices

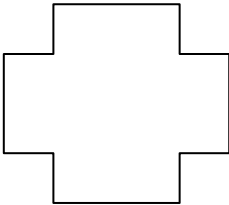
Worksheet 2

Answer the questions below.



How many vertices does this shape have? _____

How many sides does this shape have? _____



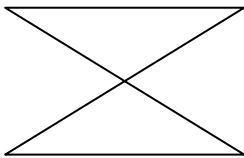
How many vertices does this shape have? _____

How many sides does this shape have? _____



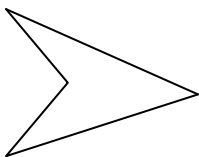
How many vertices does this shape have? _____

How many sides does this shape have? _____



How many vertices does this shape have? _____

How many sides does this shape have? _____



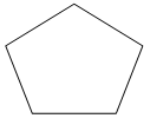
How many vertices does this shape have? _____

How many sides does this shape have? _____

Sides and Vertices Worksheet 1
Item 1364-1


Sides and Vertices
Worksheet 1

Answer the questions below for each shape.



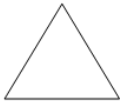
How many vertices does this shape have? **5**

How many sides does this shape have? **5**



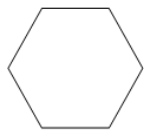
How many vertices does this shape have? **4**

How many sides does this shape have? **4**



How many vertices does this shape have? **3**

How many sides does this shape have? **3**



How many vertices does this shape have? **6**

How many sides does this shape have? **6**




How many vertices does this shape have? **4**

How many sides does this shape have? **4**

Sides and Vertices Worksheet 2
Item 1354-2

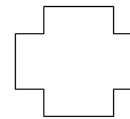
Sides and Vertices
Worksheet 2

Answer the questions below for each shape.



How many vertices does this shape have? **4**

How many sides does this shape have? **4**



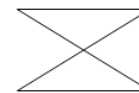
How many vertices does this shape have? **12**

How many sides does this shape have? **12**



How many vertices does this shape have? **5**

How many sides does this shape have? **5**



How many vertices does this shape have? **6**

How many sides does this shape have? **6**



How many vertices does this shape have? **4**

How many sides does this shape have? **4**