


# Sides and Vertices

## Worksheet 2

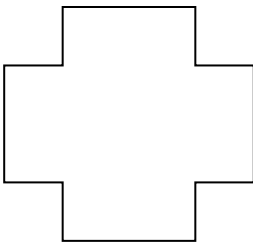
---

Answer the questions about each shape.



How many vertices does this shape have? \_\_\_\_\_

How many sides does this shape have? \_\_\_\_\_



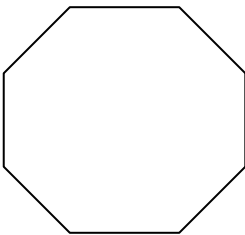
How many vertices does this shape have? \_\_\_\_\_

How many sides does this shape have? \_\_\_\_\_



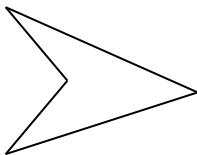
How many vertices does this shape have? \_\_\_\_\_

How many sides does this shape have? \_\_\_\_\_



How many vertices does this shape have? \_\_\_\_\_

How many sides does this shape have? \_\_\_\_\_



How many vertices does this shape have? \_\_\_\_\_

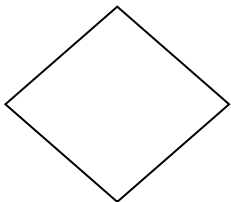
How many sides does this shape have? \_\_\_\_\_

# Sides and Vertices

## Worksheet 2

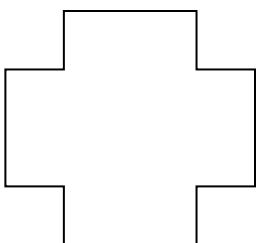
---

Answer the questions about each shape.



How many vertices does this shape have? 4

How many sides does this shape have? 4



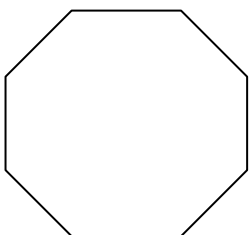
How many vertices does this shape have? 12

How many sides does this shape have? 12



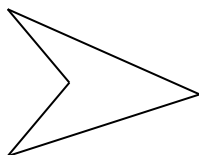
How many vertices does this shape have? 5

How many sides does this shape have? 5



How many vertices does this shape have? 8

How many sides does this shape have? 8



How many vertices does this shape have? 4

How many sides does this shape have? 4