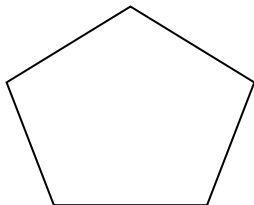


Sides and Vertices

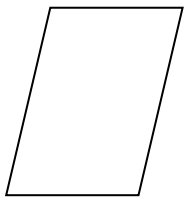
Worksheet 1

Answer the questions about each shape.



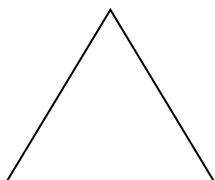
How many vertices does this shape have? _____

How many sides does this shape have? _____



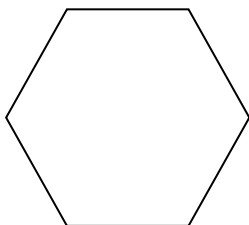
How many vertices does this shape have? _____

How many sides does this shape have? _____




How many vertices does this shape have? _____

How many sides does this shape have? _____



How many vertices does this shape have? _____

How many sides does this shape have? _____



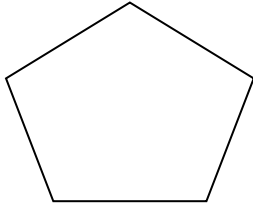
How many vertices does this shape have? _____

How many sides does this shape have? _____

Sides and Vertices

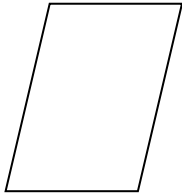
Worksheet 1

Answer the questions about each shape.



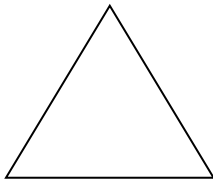
How many vertices does this shape have? **5**

How many sides does this shape have? **5**



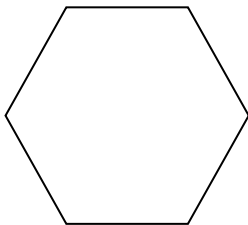
How many vertices does this shape have? **4**

How many sides does this shape have? **4**




How many vertices does this shape have? **3**

How many sides does this shape have? **3**



How many vertices does this shape have? **6**

How many sides does this shape have? **6**



How many vertices does this shape have? **4**

How many sides does this shape have? **4**