

Sharpen Your Skills

Worksheet 5

Write as a decimal.

1. $\frac{3}{10} =$ _____

2. $18\frac{4}{10} =$ _____

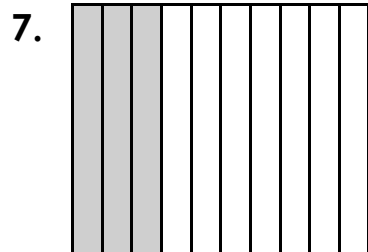
3. seven tenths = _____

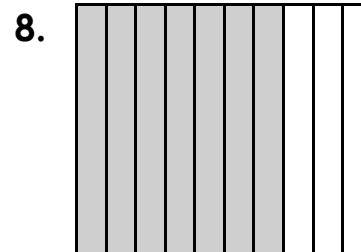
4. 2 and 9 tenths = _____


5. $\frac{35}{100} =$ _____

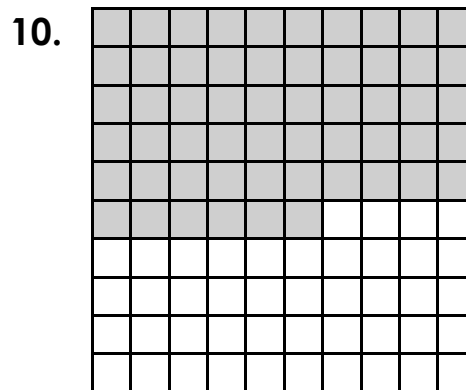
6. $33\frac{19}{100} =$ _____

Write a decimal for the shaded part.









Sharpen Your Skills

Worksheet 5

Write as a decimal.

1. $\frac{3}{10} = \underline{.3}$

2. $18\frac{4}{10} = \underline{18.4}$

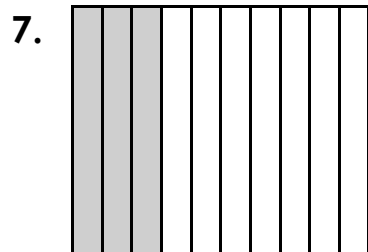
3. seven tenths = .7

4. 2 and 9 tenths = 2.9

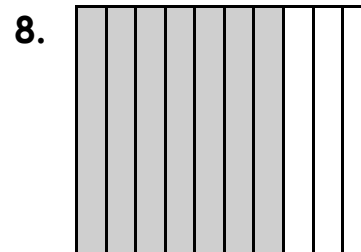
5. $\frac{35}{100} = \underline{.35}$

6. $33\frac{19}{100} = \underline{33.19}$


Write a decimal for the shaded part.




.3



.7



.39



.56