



# One Two Three


Worksheet 1



1  
one  
I



2  
two  
II



3  
three  
III

1. Here are three circles    with dots in them.

How many dots are in the first circle? \_\_\_\_\_


How many dots are in the second circle? \_\_\_\_\_


How many dots are in the third circle? \_\_\_\_\_

2. How many more dots are in the third circle than in the first? \_\_\_\_\_

3. How many more dots are in the second circle than in the first? \_\_\_\_\_

4. How many more dots are in the third circle than in the second? \_\_\_\_\_

5. Draw one dot in the circle. 


Draw two dots in the circle. 

 and  are how many dots? \_\_\_\_\_

$$\bullet + \bullet\bullet = \underline{\hspace{2cm}}$$

$$1 + 2 = \underline{\hspace{2cm}}$$

6. Draw two dots in the circle. 

Draw one dot in the circle. 

 and  are how many dots? \_\_\_\_\_


$$\bullet\bullet + \bullet = \underline{\hspace{2cm}}$$

$$2 + 1 = \underline{\hspace{2cm}}$$


7. Draw three dots in the circle. 

# One Two Three


Worksheet 2




I  
one  
I



2  
two  
II



3  
three  
III



4  
four  
IV

1. Here are four triangles  with dots in them.

How many dots are in the first triangle? \_\_\_\_\_

How many dots are in the second triangle? \_\_\_\_\_

How many dots are in the third triangle? \_\_\_\_\_

How many dots are in the fourth triangle? \_\_\_\_\_

2. How many more dots are in the second triangle than in the first? \_\_\_\_\_

3. How many more dots are in the fourth triangle than in the second? \_\_\_\_\_

4. How many more dots are in the third triangle than in the second? \_\_\_\_\_

5. Draw one dot in the triangle.



● and ●●● are how many dots? \_\_\_\_\_

Draw three dots in the triangle.



$$\bullet + \bullet\bullet\bullet = \underline{\hspace{2cm}}$$

$$1 + 3 = \underline{\hspace{2cm}}$$

6. Draw two dots in the triangle.



●● and ●● are how many dots? \_\_\_\_\_

Draw two dots in the triangle.



$$\bullet\bullet + \bullet\bullet = \underline{\hspace{2cm}}$$


$$2 + 2 = \underline{\hspace{2cm}}$$

7. Draw four dots in the triangle.




Name \_\_\_\_\_


One Two Three Worksheet 1  
Worksheet 1



I  
one  
I






2  
two  
II



3  
three  
III




---




1. Here are three circles    with dots in them.  
 How many dots are in the first circle? 1  
 How many dots are in the second circle? 2  
 How many dots are in the third circle? 3


2. How many more dots are in the third circle than in the first? 2

3. How many more dots are in the second circle than in the first? 1

4. How many more dots are in the third circle than in the second? 1

5. Draw one dot in the circle.  and  are how many dots? 3  
 Draw two dots in the circle.   $\bullet + \bullet = \underline{3}$   $1 + 2 = \underline{3}$

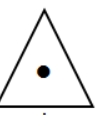
6. Draw two dots in the circle.  and  are how many dots? 3  
 Draw one dot in the circle.   $\bullet + \bullet = \underline{3}$   $2 + 1 = \underline{3}$

7. Draw three dots in the circle. 


Copyright ©2012 T. Smith Publishing. All rights reserved. www.tlsbooks.com

Name \_\_\_\_\_


One Two Three Worksheet 2  
Worksheet 2




I  
one  
I



2  
two  
II







3  
three  
III



4  
four  
IV




---




1. Here are four triangles     with dots in them.  
 How many dots are in the first triangle? 1  
 How many dots are in the second triangle? 2  
 How many dots are in the third triangle? 3  
 How many dots are in the fourth triangle? 4


2. How many more dots are in the second triangle than in the first? 1

3. How many more dots are in the fourth triangle than in the second? 2

4. How many more dots are in the third triangle than in the second? 1

5. Draw one dot in the triangle.  and  are how many dots? 4  
 Draw three dots in the triangle.   $\bullet + \bullet + \bullet = \underline{4}$   $1 + 3 = \underline{4}$

6. Draw two dots in the triangle.  and  are how many dots? 4  
 Draw two dots in the triangle.   $\bullet + \bullet = \underline{4}$   $2 + 2 = \underline{4}$

7. Draw four dots in the triangle. 

Copyright ©2012 T. Smith Publishing. All rights reserved. www.tlsbooks.com