







Number Fun

Worksheet 3

Circle the greatest number and underline the least number.



Number Fun

Worksheet 4

Circle the greatest number and underline the least number.

16 6 11	5 8 7	12 9 19
14 20 0	1 17 2	18 5 13
3 16 4	10 7 12	4 3 2

Write the number that comes

Before

Between

After

____, 3, 4

5, ____, 7

13, 14, ____

____, 19, 20

13, ____, 15




18, 19, ____

____, 11, 12

6, ____, 8

7, 8, ____

Color the greatest number.

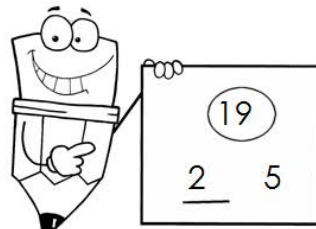
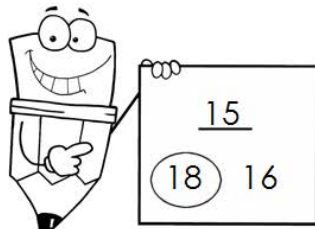

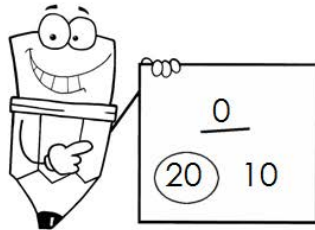

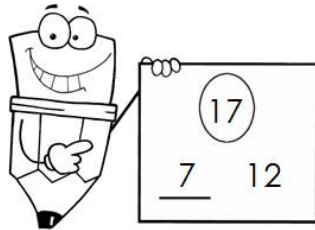


Number Fun Worksheet 3
Recognizing the greatest and least number to 20.

Number Fun

Worksheet 3

Circle the greatest number and underline the least number.



www.tlsbooks.com
Graphics ©2011 GraphicsFactory.com

Number Fun Worksheet 4
Greatest and least numbers to 20
Numbers that come before, after, and between to 20

Number Fun

Worksheet 4

Circle the greatest number and underline the least number.

16 <u>6</u> 11	<u>5</u> (8) 7	12 <u>9</u> (19)
14 (20) <u>0</u>	<u>1</u> (17) 2	(18) <u>5</u> 13
<u>3</u> (16) 4	10 <u>7</u> (12)	(4) 3 <u>2</u>

Write the number that comes

Before

Between

After

2, 3, 4

5, 6, 7

13, 14, 15

18, 19, 20

13, 14, 15



18, 19, 20

10, 11, 12

6, 7, 8

7, 8, 9

Color the greatest number.



www.tlsbooks.com
Graphics ©2011 GraphicsFactory.com