

# Name the States

## Worksheet 5

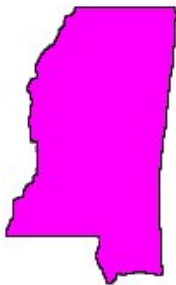
Identify the states and write the name of each state and its postal abbreviation.  
Use a United States map to check your answers.



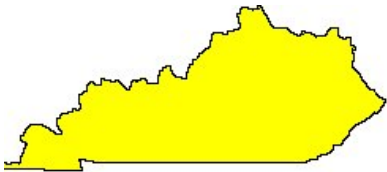
\_\_\_\_\_



\_\_\_\_\_



\_\_\_\_\_



\_\_\_\_\_

**Bonus:** These states are called the

\_\_\_\_\_



\_\_\_\_\_



\_\_\_\_\_



\_\_\_\_\_



\_\_\_\_\_

**Bonus:** These states are called the

\_\_\_\_\_

# Name the States

## Worksheet 5

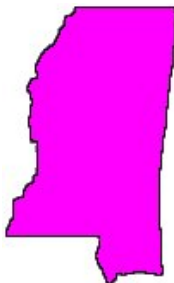
Identify the states and write the name of each state and its postal abbreviation.  
Use a United States map to check your answers.



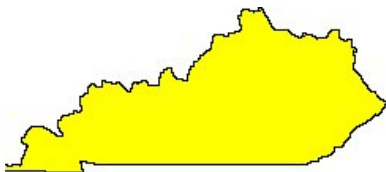
Alabama AL



Tennessee TN



Mississippi MS



Kentucky KY

**Bonus:** These states are called the East South Central States.



Texas TX



Arkansas AR



Louisiana LA



Oklahoma OK

**Bonus:** These states are called the West South Central States.