


# Name the States

## Worksheet 2


Identify the states and write the name of each state and its postal abbreviation.  
Use a United States map to check your answers.



\_\_\_\_\_




\_\_\_\_\_



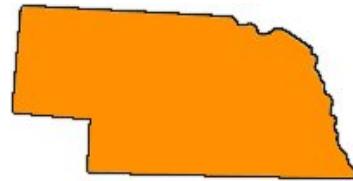
\_\_\_\_\_



\_\_\_\_\_



\_\_\_\_\_



\_\_\_\_\_




\_\_\_\_\_

**Bonus:** These states are called the \_\_\_\_\_.

## Name the States

### Worksheet 2


Identify the states and write the name of each state and its postal abbreviation.  
Use a United States map to check your answers.



North Dakota ND




Missouri MO



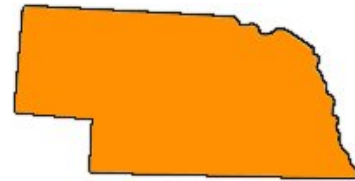
Kansas KS



South Dakota SD



Iowa IA



Nebraska NE



Minnesota MN

**Bonus:** These states are called the West North Central States.