

Let's Learn About Money

Every coin has a fixed value. Here are some coins that you may have in your piggy bank.



penny
1¢



nickel
5¢




dime
10¢



quarter
25¢

Complete each problem.

One nickel equals how many pennies?  = _____ 

Two quarters equals how many dimes?  = _____ 

_____  =  5  = _____ 

 +  = _____ ¢

 +  = _____ ¢

 +  = _____ ¢

Name _____

Let's Learn About Money
Item 3458

Let's Learn About Money

Every coin has a fixed value. Here are some coins that you may have in your piggy bank.



penny
1¢



nickel
5¢





dime
10¢



quarter
25¢

Complete each problem.

One nickel equals how many pennies?  = 5 

Two quarters equals how many dimes?   = 5 

10  =  5  = 1 

    +    = 43 ¢

    +    = 33 ¢

  +     = 66 ¢

Copyright ©2003, 2007 T. Smith Publishing.

www.tlsbooks.com
Coins are United States Mint images