

Let's Learn About Money

Worksheet 4

Add the coins and write the total on the line.



_____ ¢



_____ ¢



_____ ¢



_____ ¢



_____ ¢



_____ ¢

Let's Learn About Money

Worksheet 4a

Add the coins and write the total on the line.



_____ ¢



_____ ¢



_____ ¢



_____ ¢



_____ ¢



_____ ¢







Let's Learn About Money Worksheet 4
 Adding pennies, nickels and dimes

Name _____

Let's Learn About Money

Worksheet 4

Add the coins and write the total on the line.

 <p><u>33</u> ¢</p>	 <p><u>20</u> ¢</p>
 <p><u>52</u> ¢</p>	 <p><u>44</u> ¢</p>
 <p><u>24</u> ¢</p>	 <p><u>44</u> ¢</p>

Copyright ©2011 T. Smith Publishing. All rights reserved. www.tlsbooks.com
 Coin graphics ©United States Mint







Let's Learn About Money Worksheet 4a
 Adding nickels and pennies

Name _____

Let's Learn About Money

Worksheet 4a

Add the coins and write the total on the line.

 <p><u>53</u> ¢</p>	 <p><u>33</u> ¢</p>
 <p><u>54</u> ¢</p>	 <p><u>30</u> ¢</p>
 <p><u>50</u> ¢</p>	 <p><u>53</u> ¢</p>

Copyright ©2011 T. Smith Publishing. All rights reserved. www.tlsbooks.com
 Coin graphics ©United States Mint