



Know Your Fractions

Worksheet 2


Draw a line from the portion of each shape to the appropriate fraction or whole number.




$$\frac{3}{4}$$



$$\frac{1}{4}$$



$$\frac{1}{2}$$



$$1$$

Draw a picture to represent each fraction or whole number.

$$\frac{1}{2}$$

$$\frac{3}{4}$$

$$\frac{1}{4}$$

$$1$$

Know Your Fractions

Worksheet 2

Draw a line from the portion of each shape to the appropriate fraction or whole number.

$\frac{3}{4}$
 $\frac{1}{4}$
 $\frac{1}{2}$
1

Draw a picture to represent each fraction or whole number.

$\frac{1}{2}$

$\frac{3}{4}$

$\frac{1}{4}$

1