



Know Your Fractions

Worksheet 1

Draw a line from the portion of each shape to the appropriate fraction or whole number.




$$\frac{1}{4}$$



$$1$$



$$\frac{3}{4}$$



$$\frac{1}{2}$$

Draw a picture to represent each fraction or whole number.

$$\frac{1}{2}$$

$$\frac{3}{4}$$

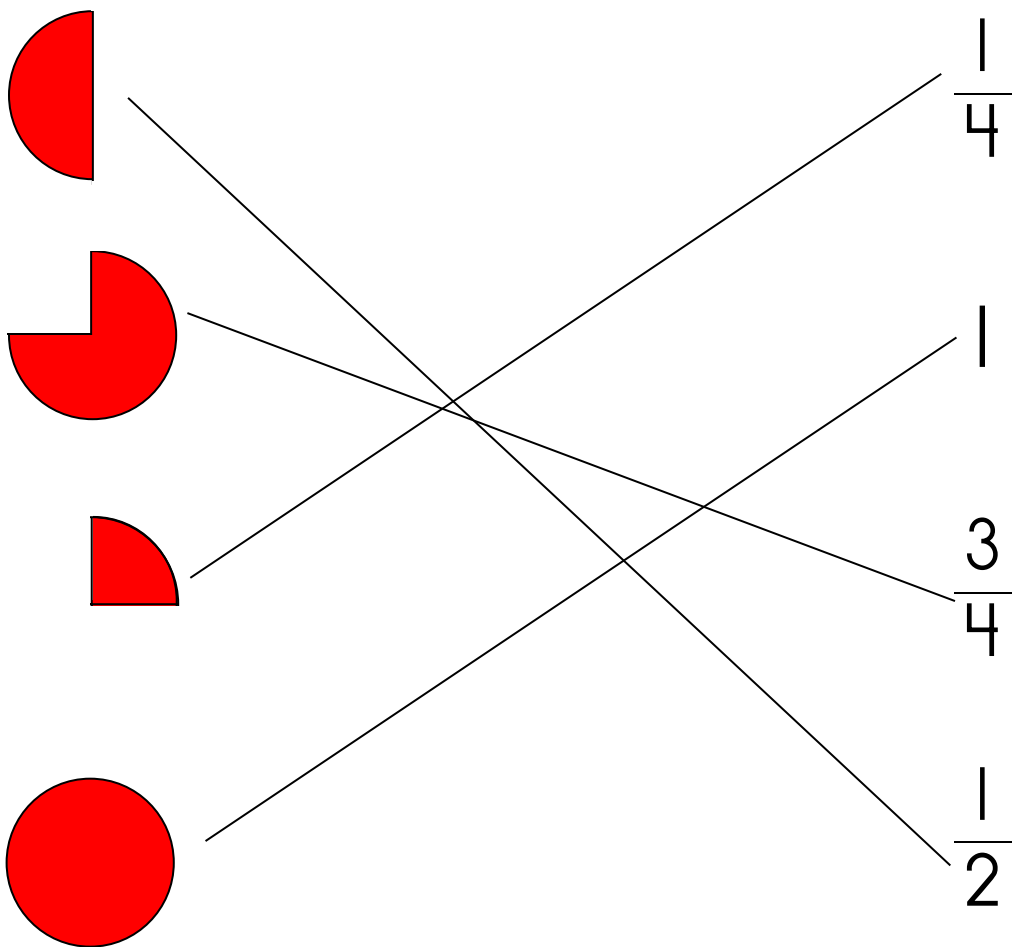
$$\frac{1}{4}$$

$$1$$

Know Your Fractions

Worksheet 1

Draw a line from the portion of each shape to the appropriate fraction or whole number.



Draw a picture to represent each fraction or whole number.

