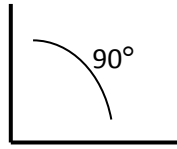


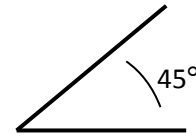
Identifying Angles

Examine each angle and select the correct answer.



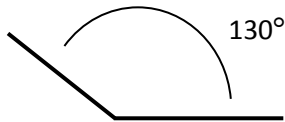
- acute angle
- right angle

- obtuse angle
- straight angle



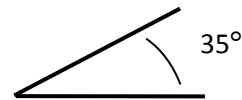
- acute angle
- right angle

- obtuse angle
 - straight angle
-



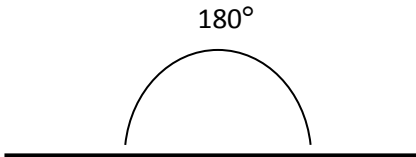
- acute angle
- right angle

- obtuse angle
- straight angle



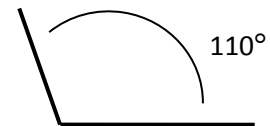
- acute angle
- right angle

- obtuse angle
 - straight angle
-



- acute angle
- right angle

- obtuse angle
- straight angle



- acute angle
- right angle

- obtuse angle
 - straight angle
-



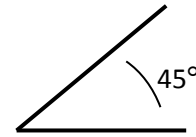
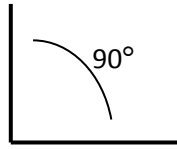
- acute angle
- right angle

- obtuse angle
 - straight angle
-



Identifying Angles

Examine each angle and select the correct answer.

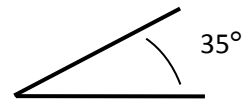
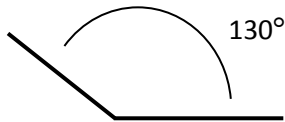


- acute angle
 right angle

- obtuse angle
 straight angle

- acute angle
 right angle

- obtuse angle
 straight angle
-

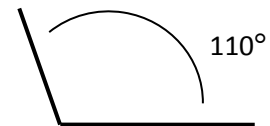
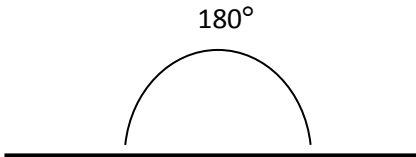


- acute angle
 right angle

- obtuse angle
 straight angle

- acute angle
 right angle

- obtuse angle
 straight angle
-



- acute angle
 right angle

- obtuse angle
 straight angle

- acute angle
 right angle

- obtuse angle
 straight angle
-



- acute angle
 right angle

- obtuse angle
 straight angle
-

