

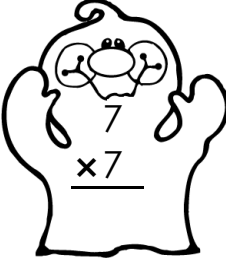

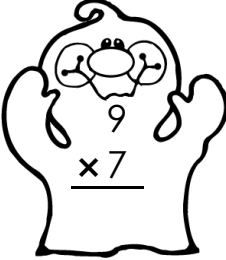

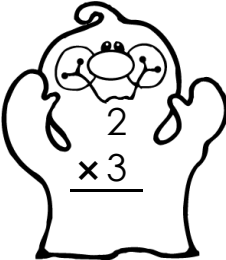
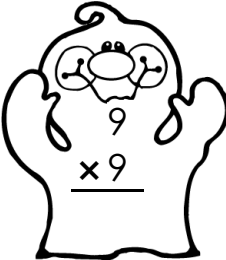
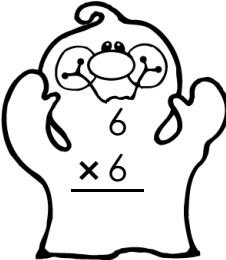
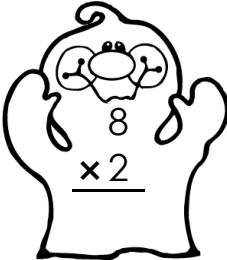
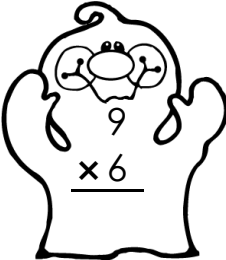
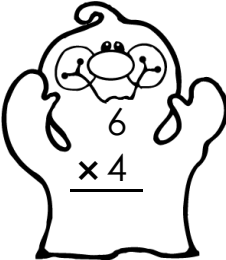
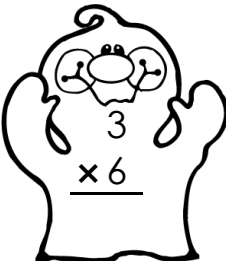

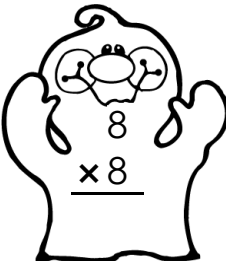
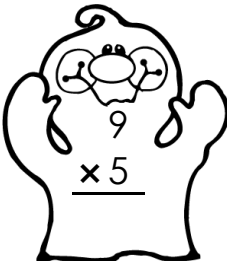
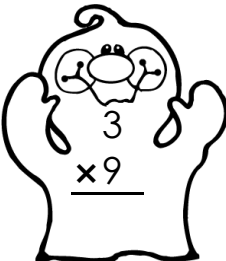
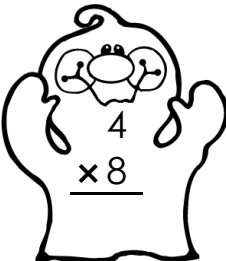
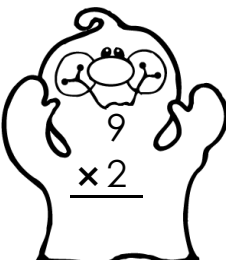
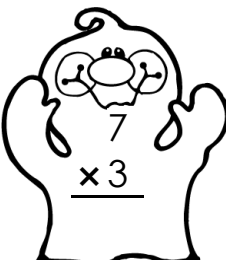

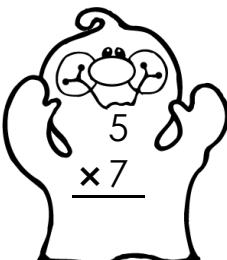
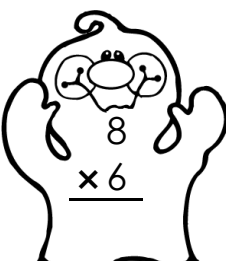
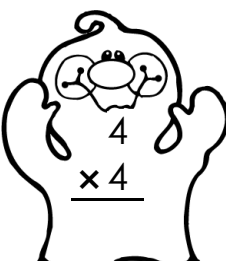
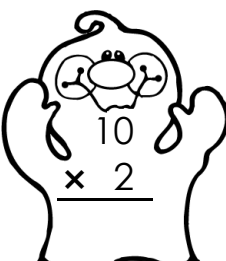
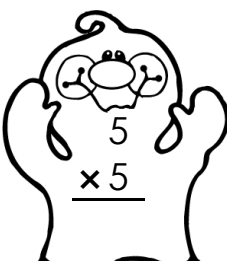



Halloween Math Maze

Worksheet 3

Solve the multiplication problems. Color all of the ghosts that have an even product to find a path to the haunted house.

 $\begin{array}{r} 10 \\ \times 9 \\ \hline \end{array}$	 $\begin{array}{r} 3 \\ \times 3 \\ \hline \end{array}$	 $\begin{array}{r} 7 \\ \times 7 \\ \hline \end{array}$	 $\begin{array}{r} 5 \\ \times 3 \\ \hline \end{array}$	 $\begin{array}{r} 9 \\ \times 7 \\ \hline \end{array}$	 $\begin{array}{r} 1 \\ \times 3 \\ \hline \end{array}$
 $\begin{array}{r} 2 \\ \times 3 \\ \hline \end{array}$	 $\begin{array}{r} 9 \\ \times 9 \\ \hline \end{array}$	 $\begin{array}{r} 6 \\ \times 6 \\ \hline \end{array}$	 $\begin{array}{r} 8 \\ \times 2 \\ \hline \end{array}$	 $\begin{array}{r} 9 \\ \times 6 \\ \hline \end{array}$	 $\begin{array}{r} 6 \\ \times 4 \\ \hline \end{array}$
 $\begin{array}{r} 3 \\ \times 6 \\ \hline \end{array}$	 $\begin{array}{r} 5 \\ \times 9 \\ \hline \end{array}$	 $\begin{array}{r} 8 \\ \times 8 \\ \hline \end{array}$	 $\begin{array}{r} 9 \\ \times 5 \\ \hline \end{array}$	 $\begin{array}{r} 3 \\ \times 9 \\ \hline \end{array}$	 $\begin{array}{r} 4 \\ \times 8 \\ \hline \end{array}$
 $\begin{array}{r} 9 \\ \times 2 \\ \hline \end{array}$	 $\begin{array}{r} 7 \\ \times 3 \\ \hline \end{array}$	 $\begin{array}{r} 7 \\ \times 4 \\ \hline \end{array}$	 $\begin{array}{r} 5 \\ \times 7 \\ \hline \end{array}$		
 $\begin{array}{r} 8 \\ \times 6 \\ \hline \end{array}$	 $\begin{array}{r} 4 \\ \times 4 \\ \hline \end{array}$	 $\begin{array}{r} 10 \\ \times 2 \\ \hline \end{array}$	 $\begin{array}{r} 5 \\ \times 5 \\ \hline \end{array}$		




Name _____

Halloween Math Maze Worksheet 3

Halloween Math Maze Worksheet 3

Solve the multiplication problems. Color all of the ghosts that have an even product to find a path to the haunted house.

$\begin{array}{r} 10 \\ \times 9 \\ \hline 90 \end{array}$	$\begin{array}{r} 3 \\ \times 3 \\ \hline 9 \end{array}$	$\begin{array}{r} 7 \\ \times 7 \\ \hline 49 \end{array}$	$\begin{array}{r} 5 \\ \times 3 \\ \hline 15 \end{array}$	$\begin{array}{r} 9 \\ \times 7 \\ \hline 63 \end{array}$	$\begin{array}{r} 1 \\ \times 3 \\ \hline 3 \end{array}$
$\begin{array}{r} 2 \\ \times 3 \\ \hline 6 \end{array}$	$\begin{array}{r} 9 \\ \times 9 \\ \hline 81 \end{array}$	$\begin{array}{r} 6 \\ \times 6 \\ \hline 36 \end{array}$	$\begin{array}{r} 8 \\ \times 2 \\ \hline 16 \end{array}$	$\begin{array}{r} 9 \\ \times 6 \\ \hline 54 \end{array}$	$\begin{array}{r} 6 \\ \times 4 \\ \hline 24 \end{array}$
$\begin{array}{r} 3 \\ \times 6 \\ \hline 18 \end{array}$	$\begin{array}{r} 5 \\ \times 9 \\ \hline 45 \end{array}$	$\begin{array}{r} 8 \\ \times 8 \\ \hline 64 \end{array}$	$\begin{array}{r} 9 \\ \times 5 \\ \hline 45 \end{array}$	$\begin{array}{r} 3 \\ \times 9 \\ \hline 27 \end{array}$	$\begin{array}{r} 4 \\ \times 8 \\ \hline 32 \end{array}$
$\begin{array}{r} 9 \\ \times 2 \\ \hline 18 \end{array}$	$\begin{array}{r} 7 \\ \times 3 \\ \hline 21 \end{array}$	$\begin{array}{r} 7 \\ \times 4 \\ \hline 28 \end{array}$	$\begin{array}{r} 5 \\ \times 7 \\ \hline 35 \end{array}$		
$\begin{array}{r} 8 \\ \times 6 \\ \hline 48 \end{array}$	$\begin{array}{r} 4 \\ \times 4 \\ \hline 16 \end{array}$	$\begin{array}{r} 10 \\ \times 2 \\ \hline 20 \end{array}$	$\begin{array}{r} 5 \\ \times 5 \\ \hline 25 \end{array}$		

www.tlsbooks.com
Graphics ©2011 GraphicsFactory.com