


Christmas Doubles Addition

Worksheet 1


Add.

A.



$$1 + 1 = \underline{\quad}$$

B.



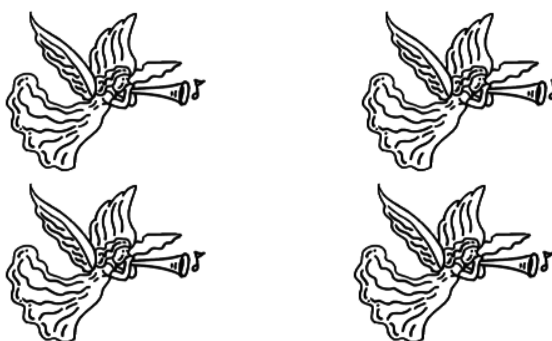
$$4 + 4 = \underline{\quad}$$

C.




$$5 + 5 = \underline{\quad}$$

D.



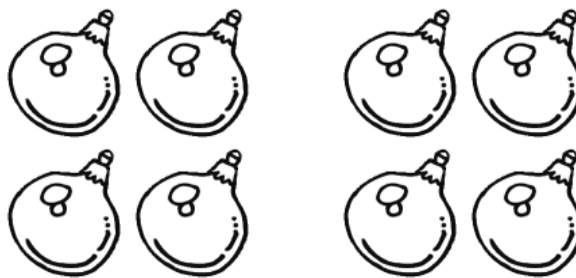
$$2 + 2 = \underline{\quad}$$

E.



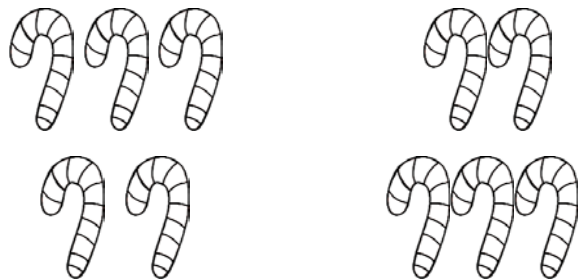
$$3 + 3 = \underline{\quad}$$

F.




$$4 + 4 = \underline{\quad}$$

G.



$$5 + 5 = \underline{\quad}$$

H.




$$3 + 3 = \underline{\quad}$$

Christmas Doubles Addition

Worksheet 1

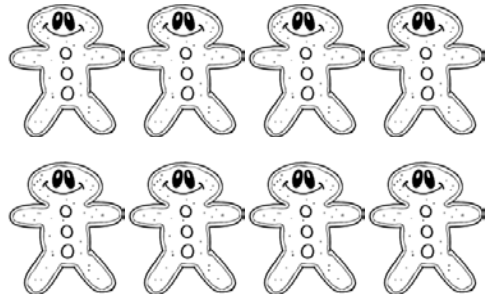
Add.

A.



$$1 + 1 = \underline{2}$$

B.



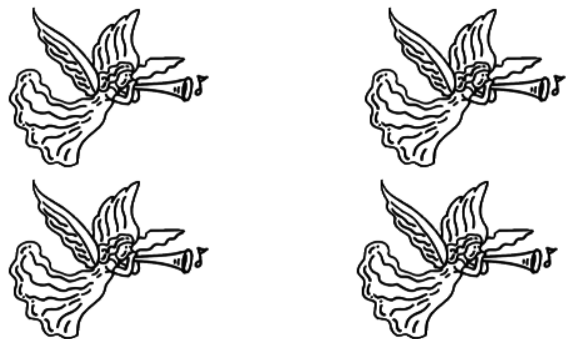
$$4 + 4 = \underline{8}$$

C.




$$5 + 5 = \underline{10}$$

D.



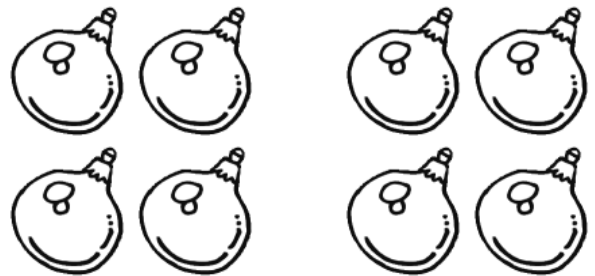
$$2 + 2 = \underline{4}$$

E.



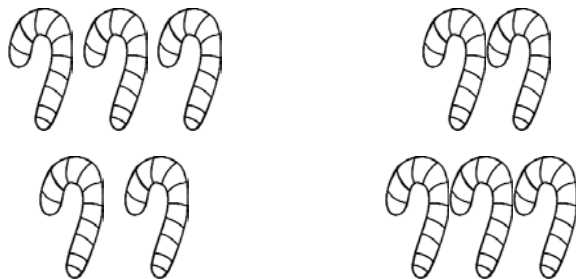
$$3 + 3 = \underline{6}$$

F.




$$4 + 4 = \underline{8}$$

G.



$$5 + 5 = \underline{10}$$

H.



$$3 + 3 = \underline{6}$$