

Addition Practice

1.
$$\begin{array}{r} 28 \\ 41 \\ + 20 \\ \hline \end{array}$$

2.
$$\begin{array}{r} 10 \\ 49 \\ + 30 \\ \hline \end{array}$$


3.
$$\begin{array}{r} 26 \\ 23 \\ + 40 \\ \hline \end{array}$$

4.
$$\begin{array}{r} 86 \\ 12 \\ + 30 \\ \hline \end{array}$$

5.
$$\begin{array}{r} 61 \\ 30 \\ + 27 \\ \hline \end{array}$$

6.
$$\begin{array}{r} 34 \\ 11 \\ + 63 \\ \hline \end{array}$$

7.
$$\begin{array}{r} 88 \\ 30 \\ + 41 \\ \hline \end{array}$$



8.
$$\begin{array}{r} 96 \\ 11 \\ + 42 \\ \hline \end{array}$$

9.
$$\begin{array}{r} 69 \\ 10 \\ + 10 \\ \hline \end{array}$$

10.
$$\begin{array}{r} 19 \\ 10 \\ + 50 \\ \hline \end{array}$$

11.
$$\begin{array}{r} 66 \\ 80 \\ + 32 \\ \hline \end{array}$$

12.
$$\begin{array}{r} 33 \\ 92 \\ + 20 \\ \hline \end{array}$$


13.
$$\begin{array}{r} 11 \\ 93 \\ + 24 \\ \hline \end{array}$$

14.
$$\begin{array}{r} 90 \\ 19 \\ + 20 \\ \hline \end{array}$$

15.
$$\begin{array}{r} 20 \\ 95 \\ + 11 \\ \hline \end{array}$$



Skills: adding three 2-digit numbers, finding sums to 200.



Addition Practice

1.
$$\begin{array}{r} 28 \\ 41 \\ + 20 \\ \hline 89 \end{array}$$

2.
$$\begin{array}{r} 10 \\ 49 \\ + 30 \\ \hline 89 \end{array}$$

3.
$$\begin{array}{r} 26 \\ 23 \\ + 40 \\ \hline 89 \end{array}$$

4.
$$\begin{array}{r} 86 \\ 12 \\ + 30 \\ \hline 128 \end{array}$$


5.
$$\begin{array}{r} 61 \\ 30 \\ + 27 \\ \hline 118 \end{array}$$

6.
$$\begin{array}{r} 34 \\ 11 \\ + 63 \\ \hline 108 \end{array}$$

7.
$$\begin{array}{r} 88 \\ 30 \\ + 41 \\ \hline 159 \end{array}$$

8.
$$\begin{array}{r} 96 \\ 11 \\ + 42 \\ \hline 149 \end{array}$$

9.
$$\begin{array}{r} 69 \\ 10 \\ + 10 \\ \hline 89 \end{array}$$



10.
$$\begin{array}{r} 19 \\ 10 \\ + 50 \\ \hline 79 \end{array}$$

11.
$$\begin{array}{r} 66 \\ 80 \\ + 32 \\ \hline 178 \end{array}$$

12.
$$\begin{array}{r} 33 \\ 92 \\ + 20 \\ \hline 145 \end{array}$$

13.
$$\begin{array}{r} 11 \\ 93 \\ + 24 \\ \hline 128 \end{array}$$

14.
$$\begin{array}{r} 90 \\ 19 \\ + 20 \\ \hline 129 \end{array}$$

15.
$$\begin{array}{r} 20 \\ 95 \\ + 11 \\ \hline 126 \end{array}$$



Skills: adding three 2-digit numbers, finding sums to 200.