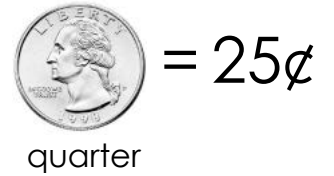
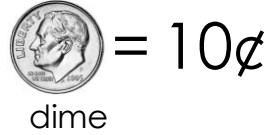
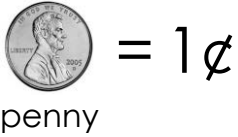


# Adding Coins

Worksheet 7

Add the coins in each piggy bank and write the total amount in the box.



Skill: adding pennies, nickels, dimes, and quarters to 85¢.

# Adding Coins

Worksheet 7

Add the coins in each piggy bank and write the total amount in the box.



= 1¢

penny



= 5¢

nickel



= 10¢

dime



= 25¢

quarter



50¢



85¢



42¢



61¢

Skill: adding pennies, nickels, dimes, and quarters to 85¢.