
























# Add the Shapes

## Worksheet 4


Add and write the sum on the line. The first one is done for you.


 $5 + 2 = 7$	  $2 + 7 = \underline{\quad}$
  $3 + 3 = \underline{\quad}$	  $4 + 2 = \underline{\quad}$
  $8 + 1 = \underline{\quad}$	  $3 + 4 = \underline{\quad}$
  $0 + 9 = \underline{\quad}$	  $1 + 5 = \underline{\quad}$
  $3 + 6 = \underline{\quad}$	  $9 + 1 = \underline{\quad}$
  $6 + 2 = \underline{\quad}$	  $5 + 0 = \underline{\quad}$


# Add the Shapes


## Worksheet 5


Add and write the sum on the line. The first one is done for you.


 $1 + 2 = 3$


 $2 + 8 = \underline{\quad}$


 $4 + 6 = \underline{\quad}$


 $8 + 2 = \underline{\quad}$


 $6 + 3 = \underline{\quad}$


 $3 + 7 = \underline{\quad}$


 $5 + 5 = \underline{\quad}$

 $4 + 5 = \underline{\quad}$

 $2 + 6 = \underline{\quad}$

 $1 + 9 = \underline{\quad}$

 $3 + 5 = \underline{\quad}$

 $4 + 4 = \underline{\quad}$













Add the Shapes Worksheet 4  
Item 4017-A

Name \_\_\_\_\_

### Add the Shapes

Worksheet 4

Add and write the sum on the line. The first one is done for you.

 $5 + 2 = 7$	 $2 + 7 = 9$
 $3 + 3 = 6$	 $4 + 2 = 6$
 $8 + 1 = 9$	 $3 + 4 = 7$
 $0 + 9 = 9$	 $1 + 5 = 6$
 $3 + 6 = 9$	 $9 + 1 = 10$
 $6 + 2 = 8$	 $5 + 0 = 5$

Skill: Adding objects to ten.  
Copyright 2014 T. Smith Publishing. All rights reserved. [www.tlsbooks.com](http://www.tlsbooks.com)













Add the Shapes Worksheet 5  
Item 4017-B

Name \_\_\_\_\_

### Add the Shapes

Worksheet 5

Add and write the sum on the line. The first one is done for you.

 $1 + 2 = 3$	 $2 + 8 = 10$
 $4 + 6 = 10$	 $8 + 2 = 10$
 $6 + 3 = 9$	 $3 + 7 = 10$
 $5 + 5 = 10$	 $4 + 5 = 9$
 $2 + 6 = 8$	 $1 + 9 = \underline{\quad}$
 $3 + 5 = 8$	 $4 + 4 = 8$

Skill: Adding objects to ten.  
Copyright 2014 T. Smith Publishing. All rights reserved. [www.tlsbooks.com](http://www.tlsbooks.com)