




# Add the Shapes


Worksheet 3


Add and write the sum on the line. The first one is done for you.



$$2 + 2 = \underline{4}$$



$$2 + 1 = \underline{\quad}$$



$$4 + 1 = \underline{\quad}$$



$$3 + 2 = \underline{\quad}$$



$$1 + 2 = \underline{\quad}$$



$$0 + 5 = \underline{\quad}$$



$$3 + 0 = \underline{\quad}$$


$$3 + 1 = \underline{\quad}$$


$$2 + 3 = \underline{\quad}$$


$$1 + 1 = \underline{\quad}$$



$$1 + 4 = \underline{\quad}$$



$$1 + 3 = \underline{\quad}$$


# Add the Shapes


Worksheet 3


Add and write the sum on the line. The first one is done for you.



$$2 + 2 = \underline{4}$$



$$2 + 1 = \underline{3}$$



$$4 + 1 = \underline{5}$$



$$3 + 2 = \underline{5}$$



$$1 + 2 = \underline{3}$$



$$0 + 5 = \underline{5}$$



$$3 + 0 = \underline{3}$$


$$3 + 1 = \underline{4}$$


$$2 + 3 = \underline{5}$$


$$1 + 1 = \underline{2}$$


$$1 + 4 = \underline{5}$$


$$1 + 3 = \underline{4}$$