




# Add the Shapes


## Worksheet 2


Add and write the sum on the line. The first one is done for you.


  
 $1 + 1 = 2$


  
 $4 + 1 = \underline{\quad}$


  
 $0 + 1 = \underline{\quad}$


  
 $2 + 1 = \underline{\quad}$


  
 $1 + 3 = \underline{\quad}$


  
 $1 + 4 = \underline{\quad}$


  
 $2 + 2 = \underline{\quad}$

  
 $1 + 1 = \underline{\quad}$

  
 $1 + 2 = \underline{\quad}$

  
 $3 + 1 = \underline{\quad}$













  
 $2 + 3 = \underline{\quad}$

  
 $4 + 0 = \underline{\quad}$

# Add the Shapes

## Worksheet 3

Add and write the sum on the line. The first one is done for you.

 $2 + 2 = 4$	 $2 + 1 = \underline{\quad}$
 $4 + 1 = \underline{\quad}$	 $3 + 2 = \underline{\quad}$
 $1 + 2 = \underline{\quad}$	 $0 + 5 = \underline{\quad}$
 $3 + 0 = \underline{\quad}$	 $3 + 1 = \underline{\quad}$
 $2 + 2 = \underline{\quad}$	 $1 + 1 = \underline{\quad}$
 $1 + 4 = \underline{\quad}$	 $1 + 3 = \underline{\quad}$













Add the Shapes Worksheet 2  
Item 4016-A

Name \_\_\_\_\_

### Add the Shapes

Worksheet 2

Add and write the sum on the line. The first one is done for you.

 $1 + 1 = 2$	 $4 + 1 = 5$
 $0 + 1 = 1$	 $2 + 1 = 3$
 $1 + 3 = 4$	 $1 + 4 = 5$
 $2 + 2 = 4$	 $1 + 1 = 2$
 $1 + 2 = 3$	 $3 + 1 = 4$
 $2 + 3 = 5$	 $4 + 0 = 4$

Skill: Adding objects to five.  
Copyright 2014 T. Smith Publishing. All rights reserved. [www.tlsbooks.com](http://www.tlsbooks.com)













Add the Shapes Worksheet 3  
Item 4016-B

Name \_\_\_\_\_

### Add the Shapes

Worksheet 3

Add and write the sum on the line. The first one is done for you.

 $2 + 2 = 4$	 $2 + 1 = 3$
 $4 + 1 = 5$	 $3 + 2 = 5$
 $1 + 2 = 3$	 $0 + 5 = 5$
 $3 + 0 = 3$	 $3 + 1 = 4$
 $2 + 3 = 5$	 $1 + 1 = 2$
 $1 + 4 = 5$	 $1 + 3 = 4$

Skill: Adding objects to five.  
Copyright 2014 T. Smith Publishing. All rights reserved. [www.tlsbooks.com](http://www.tlsbooks.com)