

# St. Patrick's Day Addition

sums to 18

Help Mr. Green find the answers to the addition problems by writing the sum in the shamrock below each problem.

$$\begin{array}{r} 3 \\ + 5 \\ \hline \end{array}$$



$$\begin{array}{r} 8 \\ + 2 \\ \hline \end{array}$$



$$\begin{array}{r} 9 \\ + 8 \\ \hline \end{array}$$



$$\begin{array}{r} 8 \\ + 4 \\ \hline \end{array}$$



$$\begin{array}{r} 4 \\ + 7 \\ \hline \end{array}$$



$$\begin{array}{r} 3 \\ + 7 \\ \hline \end{array}$$



$$\begin{array}{r} 3 \\ + 3 \\ \hline \end{array}$$



$$\begin{array}{r} 6 \\ + 7 \\ \hline \end{array}$$



$$\begin{array}{r} 7 \\ + 8 \\ \hline \end{array}$$



$$\begin{array}{r} 4 \\ + 5 \\ \hline \end{array}$$



$$\begin{array}{r} 9 \\ + 9 \\ \hline \end{array}$$



$$\begin{array}{r} 4 \\ + 6 \\ \hline \end{array}$$



$$\begin{array}{r} 2 \\ + 9 \\ \hline \end{array}$$



$$\begin{array}{r} 3 \\ + 4 \\ \hline \end{array}$$



$$\begin{array}{r} 8 \\ + 8 \\ \hline \end{array}$$



$$\begin{array}{r} 6 \\ + 9 \\ \hline \end{array}$$



$$\begin{array}{r} 8 \\ + 5 \\ \hline \end{array}$$



$$\begin{array}{r} 8 \\ + 3 \\ \hline \end{array}$$



$$\begin{array}{r} 5 \\ + 6 \\ \hline \end{array}$$



$$\begin{array}{r} 6 \\ + 6 \\ \hline \end{array}$$




# St. Patrick's Day Addition

sums to 18

Help Mr. Green find the answers to the addition problems by writing the sum in the shamrock below each problem.


$$\begin{array}{r} 3 \\ + 5 \\ \hline \end{array}$$



$$\begin{array}{r} 8 \\ + 2 \\ \hline \end{array}$$



$$\begin{array}{r} 9 \\ + 8 \\ \hline \end{array}$$



$$\begin{array}{r} 8 \\ + 4 \\ \hline \end{array}$$



$$\begin{array}{r} 4 \\ + 7 \\ \hline \end{array}$$



$$\begin{array}{r} 3 \\ + 7 \\ \hline \end{array}$$



$$\begin{array}{r} 3 \\ + 3 \\ \hline \end{array}$$



$$\begin{array}{r} 6 \\ + 7 \\ \hline \end{array}$$



$$\begin{array}{r} 7 \\ + 8 \\ \hline \end{array}$$



$$\begin{array}{r} 4 \\ + 5 \\ \hline \end{array}$$



$$\begin{array}{r} 9 \\ + 9 \\ \hline \end{array}$$



$$\begin{array}{r} 4 \\ + 6 \\ \hline \end{array}$$



$$\begin{array}{r} 2 \\ + 9 \\ \hline \end{array}$$



$$\begin{array}{r} 3 \\ + 4 \\ \hline \end{array}$$


$$\begin{array}{r} 8 \\ + 8 \\ \hline \end{array}$$


$$\begin{array}{r} 6 \\ + 9 \\ \hline \end{array}$$


$$\begin{array}{r} 8 \\ + 5 \\ \hline \end{array}$$


$$\begin{array}{r} 8 \\ + 3 \\ \hline \end{array}$$


$$\begin{array}{r} 5 \\ + 6 \\ \hline \end{array}$$


$$\begin{array}{r} 6 \\ + 6 \\ \hline \end{array}$$
