


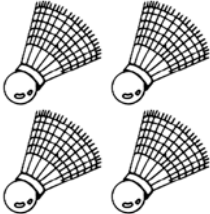
Sports Count and Add

Write a math sentence that tells about the pictures in each row.

1.  +  _____ + _____ = _____

2.  +  _____ + _____ = _____

3.  +  _____ + _____ = _____

4.  +  _____ + _____ = _____



5.  +  _____ + _____ = _____

6.  +  _____ + _____ = _____


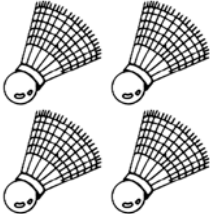
Sports Count and Add

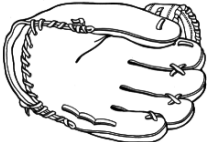
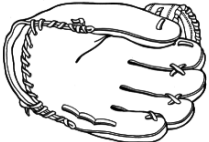
Write a math sentence that tells about the pictures in each row.

1.  +  = 2 + 2 = 4

2.  +  = 1 + 2 = 3

3.  +  = 3 + 2 = 5

4.  +  = 1 + 4 = 5

5.  +  = 1 + 1 = 2

6.  +  = 2 + 1 = 3