

# Sharpen Your Skills

worksheet 8

Write as a decimal.

1.  $\frac{39}{100} =$  \_\_\_\_\_

2.  $27\frac{41}{100} =$  \_\_\_\_\_

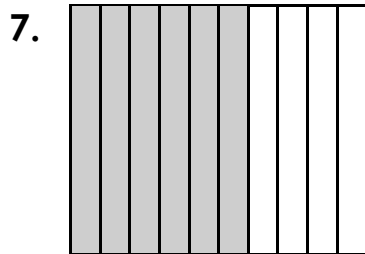
3. 357 thousandths = \_\_\_\_\_

4. 78 and 29 hundredths = \_\_\_\_\_

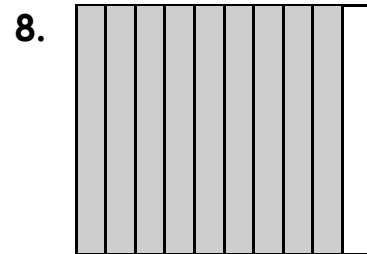
5.  $\frac{795}{1000} =$  \_\_\_\_\_

6.  $13\frac{199}{1000} =$  \_\_\_\_\_


Write a decimal and a fraction for the shaded part.




\_\_\_\_\_



\_\_\_\_\_



\_\_\_\_\_



\_\_\_\_\_

## Sharpen Your Skills

worksheet 8

Write as a decimal.

1.  $\frac{39}{100} = \underline{.39}$

2.  $27\frac{41}{100} = \underline{27.41}$

3. 357 thousandths = .357

4. 78 and 29 hundredths = 78.29

5.  $\frac{795}{1000} = \underline{.795}$

6.  $13\frac{199}{1000} = \underline{13.199}$

Write a decimal and a fraction for the shaded part.

