









## Ordering the Parts

Draw each fraction then use the drawings to help you put the fractions in order from smallest to largest.

1.      
 $\frac{1}{2}$        $\frac{1}{3}$        $\frac{1}{1}$        $\frac{1}{4}$





\_\_\_\_\_ , \_\_\_\_\_ , \_\_\_\_\_ , \_\_\_\_\_

2.      
 $\frac{1}{16}$        $\frac{1}{8}$        $\frac{1}{4}$        $\frac{1}{9}$





\_\_\_\_\_ , \_\_\_\_\_ , \_\_\_\_\_ , \_\_\_\_\_

3.      
 $\frac{1}{3}$        $\frac{1}{9}$        $\frac{1}{2}$        $\frac{1}{1}$

\_\_\_\_\_ , \_\_\_\_\_ , \_\_\_\_\_ , \_\_\_\_\_

4.      
 $\frac{1}{2}$        $\frac{1}{10}$        $\frac{1}{12}$        $\frac{1}{3}$

\_\_\_\_\_ , \_\_\_\_\_ , \_\_\_\_\_ , \_\_\_\_\_

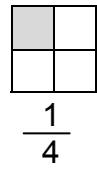
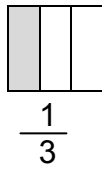
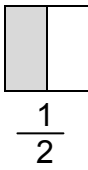
5.      
 $\frac{1}{5}$        $\frac{1}{10}$        $\frac{1}{12}$        $\frac{1}{16}$

\_\_\_\_\_ , \_\_\_\_\_ , \_\_\_\_\_ , \_\_\_\_\_

# Ordering the Parts

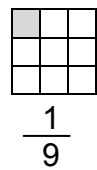
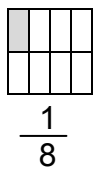
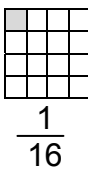
Draw each fraction then use the drawings to help you put the fractions in order from smallest to largest.

1.



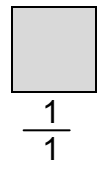
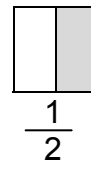
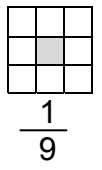
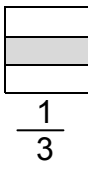
$\frac{1}{4}, \frac{1}{3}, \frac{1}{2}, \frac{1}{1}$

2.



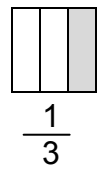
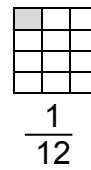
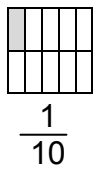
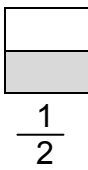
$\frac{1}{16}, \frac{1}{9}, \frac{1}{8}, \frac{1}{4}$

3.



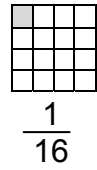
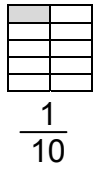
$\frac{1}{9}, \frac{1}{3}, \frac{1}{2}, \frac{1}{1}$

4.



$\frac{1}{12}, \frac{1}{10}, \frac{1}{3}, \frac{1}{2}$

5.



$\frac{1}{16}, \frac{1}{12}, \frac{1}{10}, \frac{1}{5}$