


Ocean Fractions

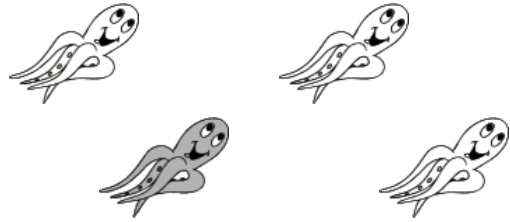
Circle the fraction that shows what part of each set is shaded.



$$\frac{1}{3}$$

$$\frac{1}{4}$$


$$\frac{2}{3}$$



$$\frac{3}{4}$$

$$\frac{1}{4}$$

$$\frac{4}{3}$$



$$\frac{1}{4}$$

$$\frac{4}{1}$$

$$\frac{3}{4}$$




$$\frac{1}{3}$$

$$\frac{2}{3}$$

$$\frac{2}{4}$$

Write the fraction that shows what part of each set is shaded.




$$\frac{\quad}{4}$$



$$\frac{\quad}{3}$$




$$\frac{\quad}{3}$$



$$\frac{\quad}{4}$$

Ocean Fractions answer key

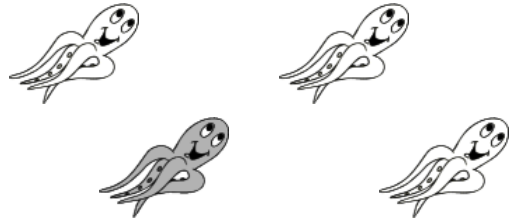
Circle the fraction that shows what part of each set is shaded.



$$\frac{1}{3}$$

$$\frac{1}{4}$$


$$\frac{2}{3}$$



$$\frac{3}{4}$$

$$\frac{1}{4}$$

$$\frac{4}{3}$$



$$\frac{1}{4}$$

$$\frac{4}{1}$$

$$\frac{3}{4}$$




$$\frac{1}{3}$$

$$\frac{2}{3}$$

$$\frac{2}{4}$$

Write the fraction that shows what part of each set is shaded.




$$\frac{1}{4}$$



$$\frac{1}{3}$$



$$\frac{2}{3}$$



$$\frac{3}{4}$$