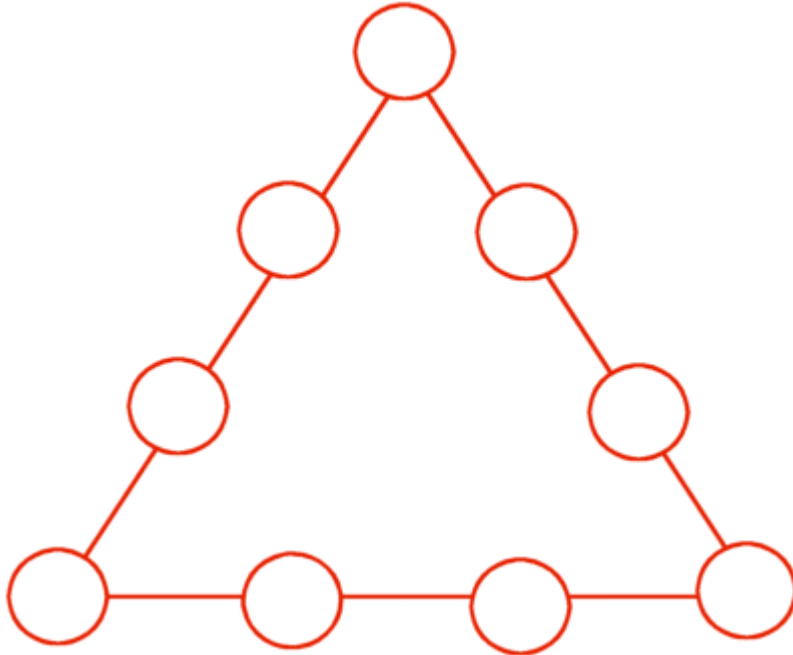


Number Triangles

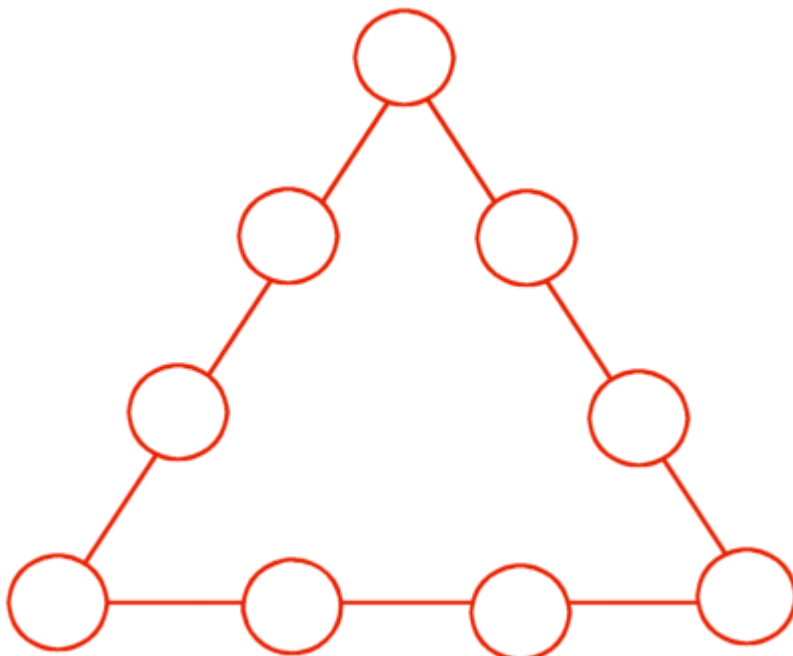
Write numbers in the circles so that each side of the triangle equals 20.



Use each number only once.

- | | |
|---|---|
| 1 | 6 |
| 2 | 7 |
| 3 | 8 |
| 4 | 9 |
| 5 | |

Write numbers in the circles so that each side of the triangle equals 19.

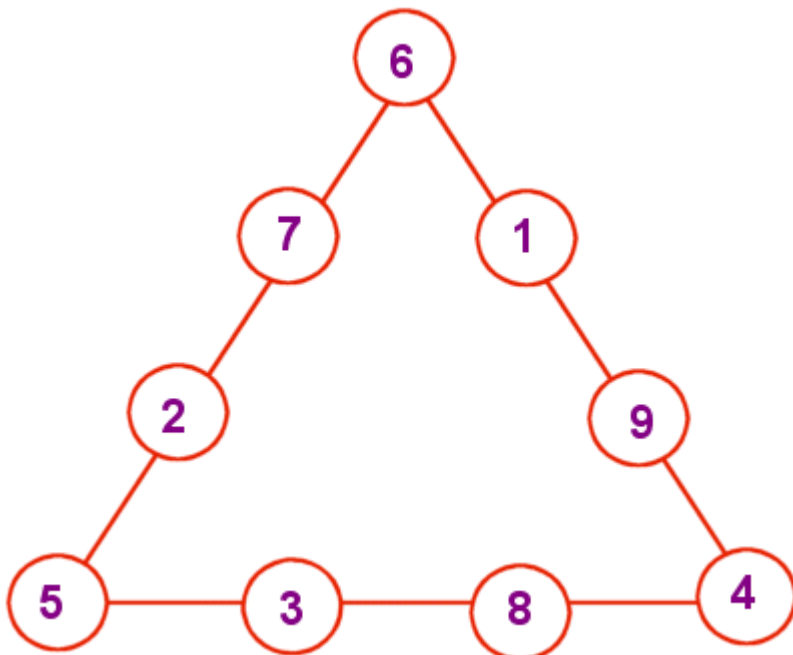


Use each number only once.

- | | |
|---|---|
| 1 | 6 |
| 2 | 7 |
| 3 | 8 |
| 4 | 9 |
| 5 | |

Number Triangles

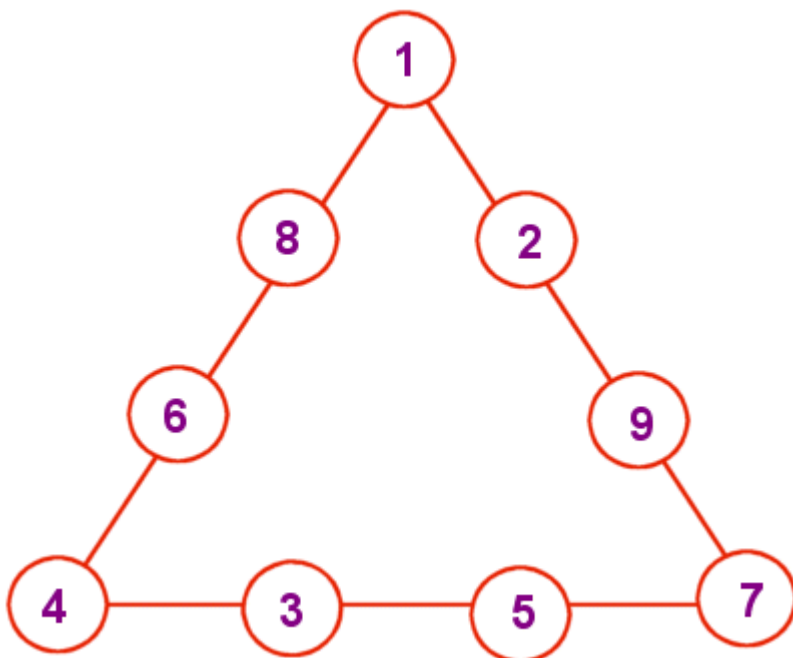
Write numbers in the circles so that each side of the triangle equals 20.



Use each number only once.

- | | |
|---|---|
| 1 | 6 |
| 2 | 7 |
| 3 | 8 |
| 4 | 9 |
| 5 | |

Write numbers in the circles so that each side of the triangle equals 19.



Use each number only once.

- | | |
|---|---|
| 1 | 6 |
| 2 | 7 |
| 3 | 8 |
| 4 | 9 |
| 5 | |