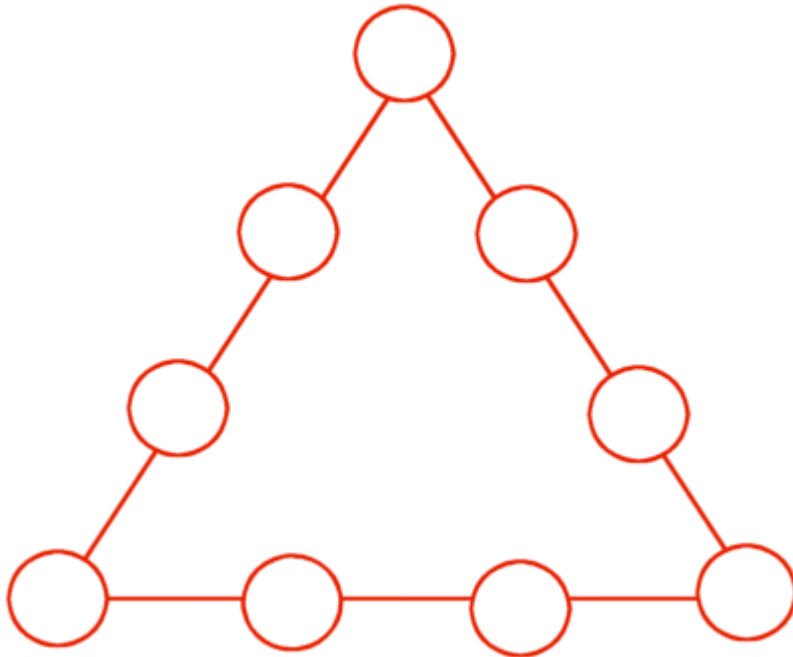


# Number Triangles

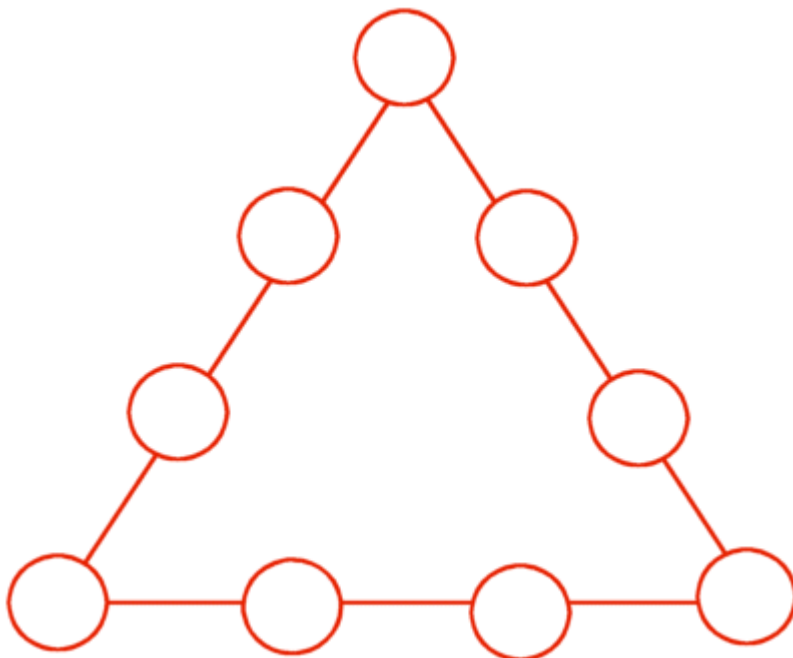
Write numbers in the circles so that each side of the triangle equals 17.



Use each number only once.

- |   |   |
|---|---|
| 1 | 6 |
| 2 | 7 |
| 3 | 8 |
| 4 | 9 |
| 5 |   |

Write numbers in the circles so that each side of the triangle equals 23.



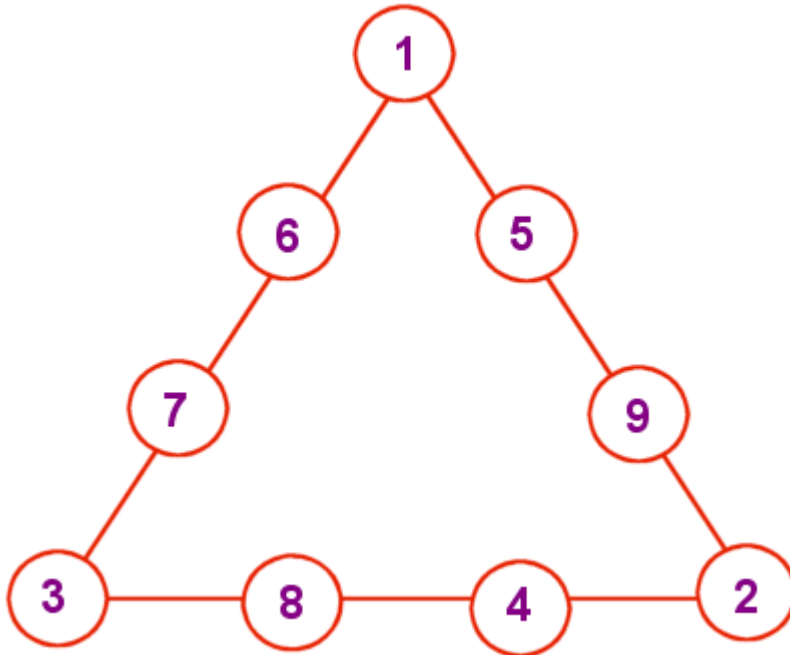
Use each number only once.

- |   |   |
|---|---|
| 1 | 6 |
| 2 | 7 |
| 3 | 8 |
| 4 | 9 |
| 5 |   |

Number Triangle Puzzle answer key Note: There may be more than one way to solve these puzzles.

## Number Triangles

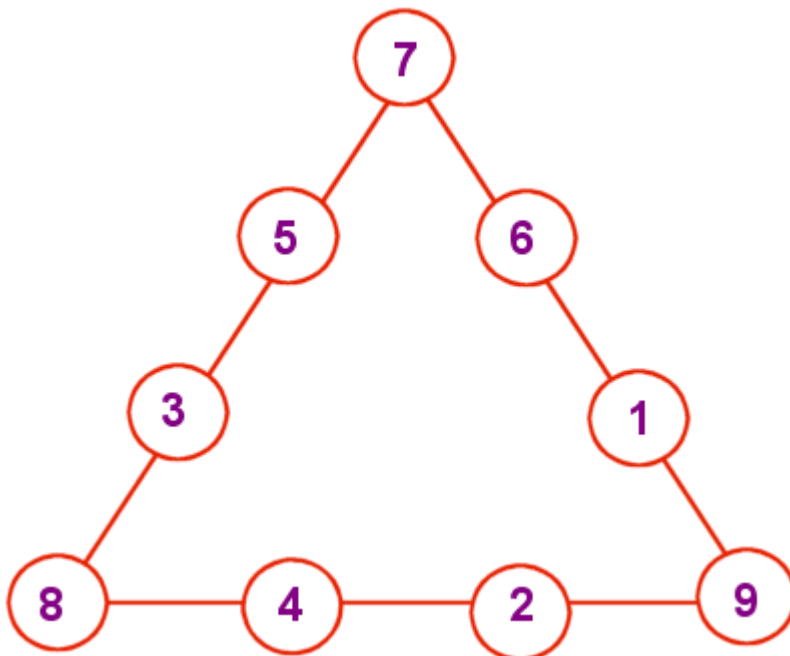
Write numbers in the circles so that each side of the triangle equals 17.



Use each number only once.

|   |   |
|---|---|
| 1 | 6 |
| 2 | 7 |
| 3 | 8 |
| 4 | 9 |
| 5 |   |

Write numbers in the circles so that each side of the triangle equals 23.



Use each number only once.

|   |   |
|---|---|
| 1 | 6 |
| 2 | 7 |
| 3 | 8 |
| 4 | 9 |
| 5 |   |