



Addition Number Chart										
+	1	2	3	4	5	6	7	8	9	10
1		3		5	6	7			10	
2	3		5	6		8		10		
3	4				8		10		12	13
4		6	7			10	11		13	
5	6			9	10			13		15
6		8	9			12	13		15	
7	8			11	12	13		15		
8		10				14	15	16	17	
9	10			13	14			17		19
10		12	13			16			19	20



Fill in the missing numbers.

Fill in the missing numbers.




Addition Number Chart										
+	1	2	3	4	5	6	7	8	9	10
1		3	4		6		8		10	
2	3			6	7			10	11	
3		5	6			9	10			13
4	5			8	9			12	13	
5	6		8		10	11			14	
6		8	9			12	13		15	
7	8	9		11		13	14			
8			11				15	16	17	18
9		11	12		14			17	18	
10	11			13		15	16			20

Fill in the missing numbers.

Addition Number Chart

+	1	2	3	4	5	6	7	8	9	10
1	2		4		6		8	9		
2		4		6		8		10	11	
3	4		6		8	9			12	
4		6		8			11		13	14
5	6	7		9	10			13		
6			9			12	13	14	15	
7			10	11	12			15		17
8	9		11		13	14		16		
9	10				14	15	16		18	
10		12		14				18	19	20



Fill in the missing numbers.

Addition Number Chart

+	1	2	3	4	5	6	7	8	9	10
1	2	3		5	6			9		
2		4	5			8	9			12
3	4		6	7				11	12	
4			7	8	9	10				14
5	6				10	11	12	13		
6		8		10	11				15	16
7	8	9			12	13	14			
8			11	12			15	16	17	
9	10	11			14	15				19
10		12			15			18	19	20

Addition Number Chart 2 answer key

Addition Number Chart										
+	1	2	3	4	5	6	7	8	9	10
1	2	3	4	5	6	7	8	9	10	11
2	3	4	5	6	7	8	9	10	11	12
3	4	5	6	7	8	9	10	11	12	13
4	5	6	7	8	9	10	11	12	13	14
5	6	7	8	9	10	11	12	13	14	15
6	7	8	9	10	11	12	13	14	15	16
7	8	9	10	11	12	13	14	15	16	17
8	9	10	11	12	13	14	15	16	17	18
9	10	11	12	13	14	15	16	17	18	19
10	11	12	13	14	15	16	17	18	19	20