


Name the States


Worksheet 1

Identify each state and write the name of each state and its postal abbreviation.
Use a United States map to check your answers.

















Bonus: These states are called the _____.


Name the States

Worksheet 1 ANSWER KEY


Identify each state and write the name of each state and its postal abbreviation.
Use a United States map to check your answers.




New Mexico NM



Arizona AZ




Wyoming WY



Colorado CO



Idaho ID



Nevada NV



Utah UT



Montana MT

Bonus: These states are called the Mountain States.