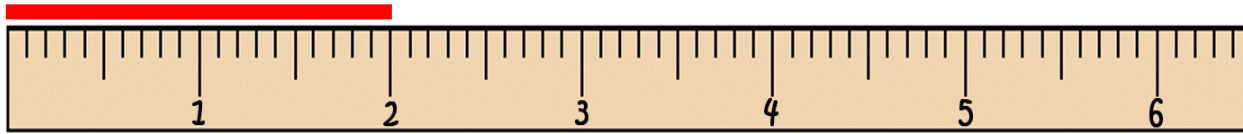
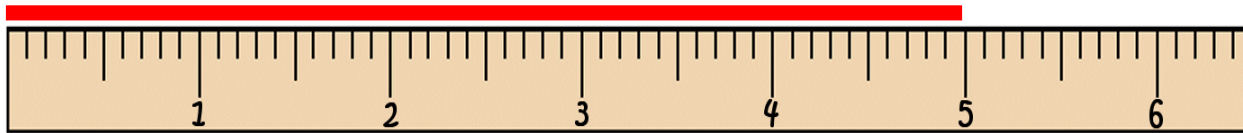


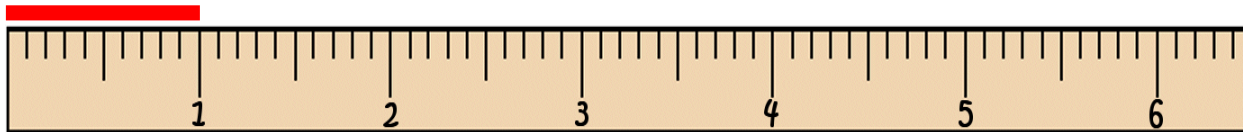
# Measure the Lines



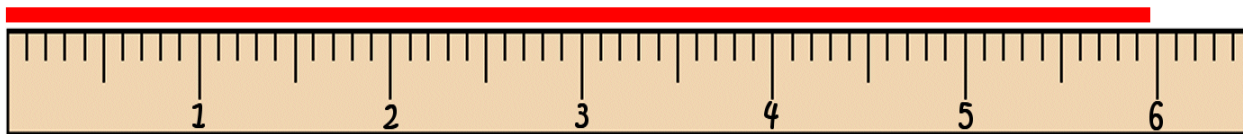
The line is \_\_\_\_\_ inches long.



The line is \_\_\_\_\_ inches long.

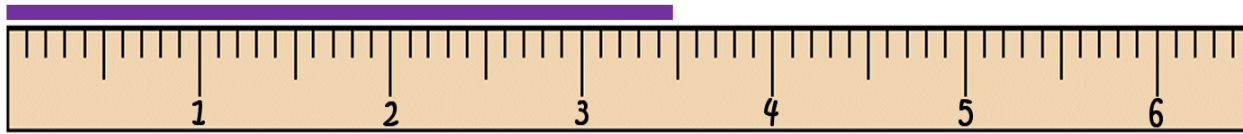


The line is \_\_\_\_\_ inch long.

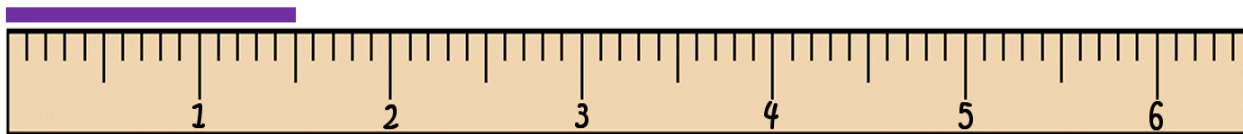


The line is \_\_\_\_\_ inches long.

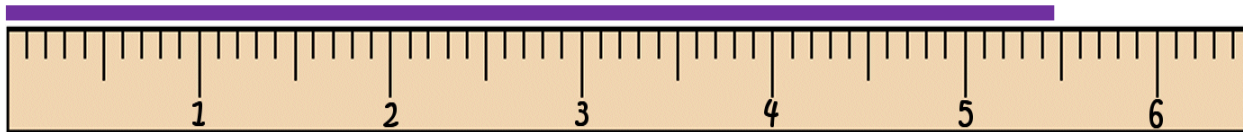
# Measure the Lines



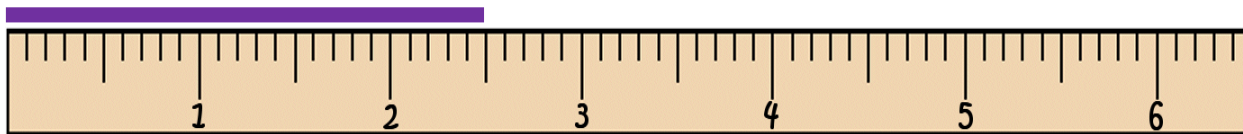
The line is \_\_\_\_\_ inches long.



The line is \_\_\_\_\_ inches long.



The line is \_\_\_\_\_ inches long.



The line is \_\_\_\_\_ inches long.

Measure the Lines  
Worksheet 1 and Worksheet 2 Answer Keys

Measure the Lines  
Worksheet 1, measuring inches

Name \_\_\_\_\_

Measure the Lines



The line is 2 inches long.



The line is 5 inches long.



The line is 1 inches long.



The line is 6 inches long.

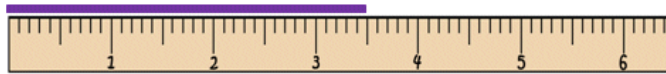
Copyright ©2011 T. Smith Publishing. All rights reserved.

[www.tlsbooks.com](http://www.tlsbooks.com)  
Graphics ©2011 T. Smith Publishing.

Measure the Lines  
Worksheet 2, measuring half inches

Name \_\_\_\_\_

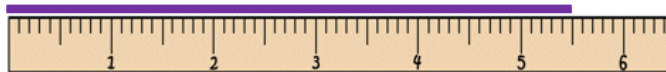
Measure the Lines



The line is 3  $\frac{1}{2}$  inches long.



The line is 1  $\frac{1}{2}$  inches long.



The line is 5  $\frac{1}{2}$  inches long.



The line is 2  $\frac{1}{2}$  inches long.

Copyright ©2011 T. Smith Publishing. All rights reserved.

[www.tlsbooks.com](http://www.tlsbooks.com)  
Graphics ©2011 T. Smith Publishing.