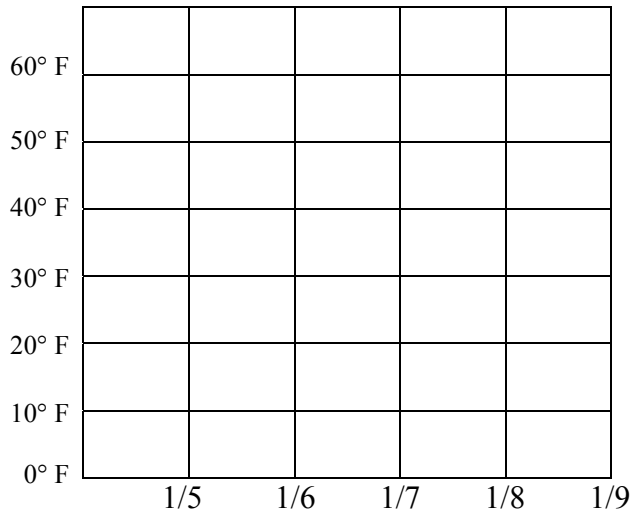


Line Graphs

Complete each exercise.

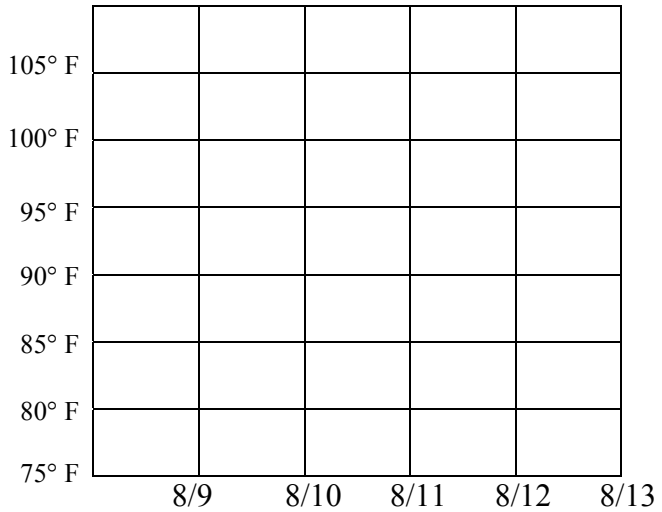
Draw a line graph to show the following temperatures:

Date	Temperature
January 5	30° F
January 6	35° F
January 7	40° F
January 8	40° F
January 9	25° F



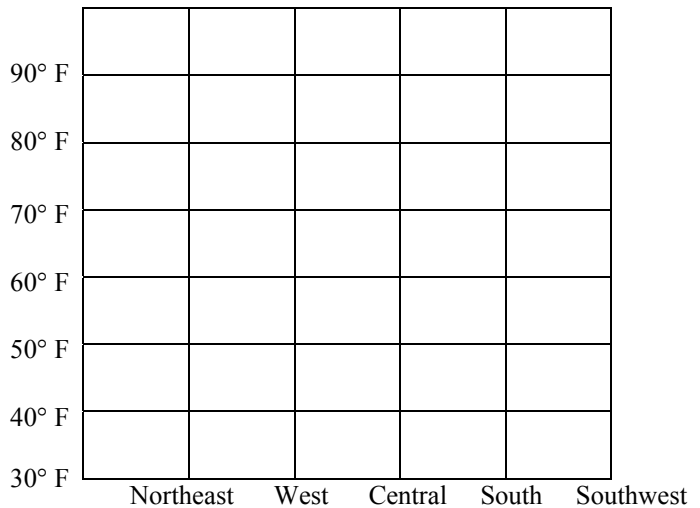
Draw a line graph to show the following temperatures:

Date	Temperature
August 9	95° F
August 10	100° F
August 11	102° F
August 12	104° F
August 13	102° F



Draw a line graph to show the following average temperatures for August 2004:

Region of U.S.	Temperature
Northeast	67° F
West	71° F
Central	71° F
South	78° F
Southwest	74° F



Answer key for Line Graphs worksheet.

