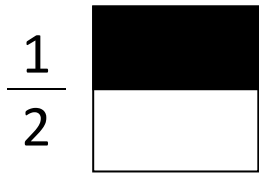



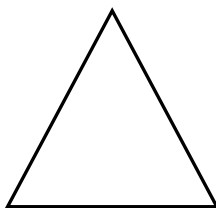
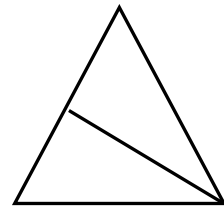
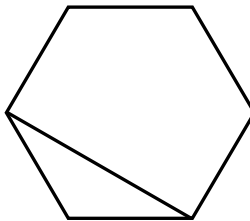

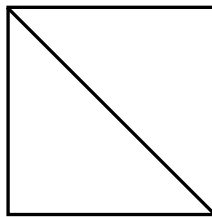
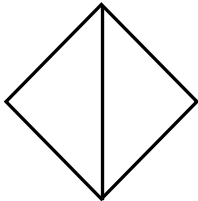
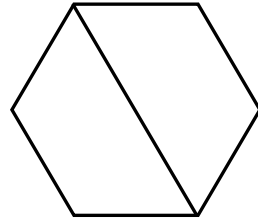
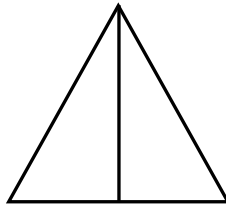

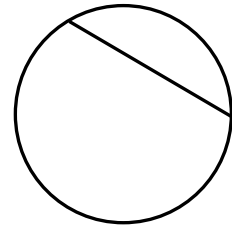
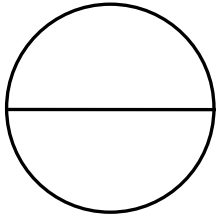
Learning About One-Half




Two equal parts are halves.

$\frac{1}{2}$ or one-half of the square is shaded.

Color $\frac{1}{2}$ of each shape that shows two equal parts.



Learning About One-Half

$\frac{1}{2}$  Two equal parts are halves.
 $\frac{1}{2}$ or one-half of the square is shaded.

Color $\frac{1}{2}$ of each shape that shows halves.

