
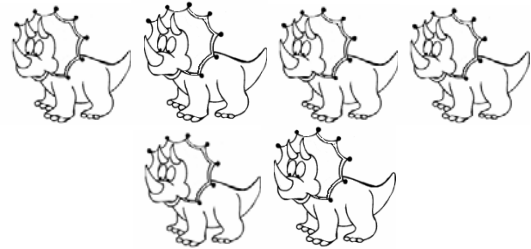


How Many Dinosaurs?


Count the dinosaurs in each group and circle the number that shows how many.




1 2 3 4 5 6




1 2 3 4 5 6




1 2 3 4 5 6




1 2 3 4 5 6




1 2 3 4 5 6



1 2 3 4 5 6




1 2 3 4 5 6




1 2 3 4 5 6

How Many Dinosaurs?


Count the dinosaurs in each group and circle the number that shows how many.




1 ② 3 4 5 6




1 2 3 4 5 ⑥




1 2 ③ 4 5 6




1 2 3 4 ⑤ 6




1 2 3 ④ 5 6



① 2 3 4 5 6



1 2 3 4 5 ⑥



1 2 ③ 4 5 6