


How Many?


Circle the number that shows how many are in each group.




1 2 3 4 5



1 2 3 4 5



1 2 3 4 5



1 2 3 4 5



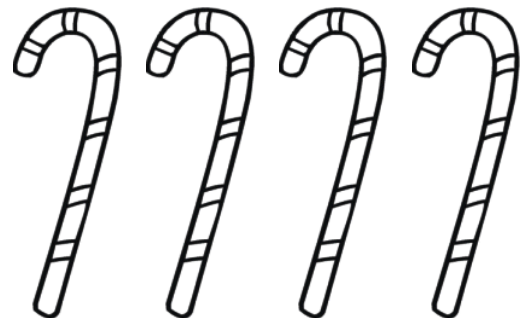
1 2 3 4 5



1 2 3 4 5




1 2 3 4 5



1 2 3 4 5

How Many?


Circle the number that shows how many are in each group.




1 2 3 4 5



1 2 3 4 5



1 2 3 4 5



1 2 3 4 5



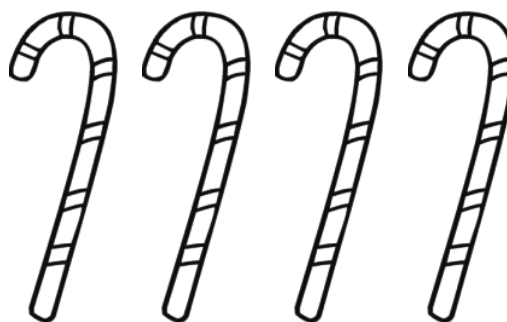
1 2 3 4 5



1 2 3 4 5



1 2 3 4 5



1 2 3 4 5