

How Many at the Zoo?


Count the zoo animals in each box and circle the correct number.




1 2 3




1 2 3




1 2 3



1 2 3




1 2 3



1 2 3



1 2 3



1 2 3

How Many at the Zoo?









How Many at the Zoo answer key.

How Many at the Zoo?

Name _____

How Many at the Zoo?

Count the zoo animals in each box and circle the correct number.

 1 2 3	 1 2 3
 1 2 3	 1 2 3
 1 2 3	 1 2 3
 1 2 3	 1 2 3

Copyright ©2007 T. Smith Publishing. All rights reserved.

www.tlsbooks.com
Graphics ©2007 Jupiter Images Corp.