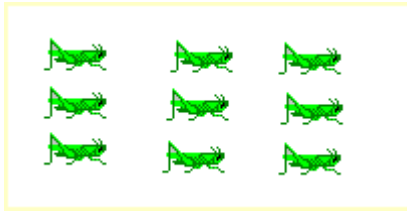


# How Many?


Count the number of objects in each box and write the number on the line.



\_\_\_\_\_

.....

\_\_\_\_\_



\_\_\_\_\_

.....

\_\_\_\_\_



\_\_\_\_\_

.....

\_\_\_\_\_



\_\_\_\_\_

.....

\_\_\_\_\_



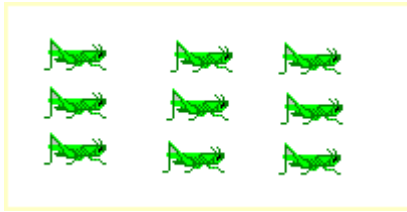
\_\_\_\_\_

.....


\_\_\_\_\_

# How Many?

Count the number of objects in each box and write the number on the line.



9



7



10



8



6