


How Many?


Count the number of objects in each box and write the number on the line.



.....



.....



.....



.....




.....

How Many?


Count the number of objects in each box and write the number on the line.



9



7



10



8



6