


Estimate and Check

Worksheet 1

Estimate how many ants are in the box and write the number here.

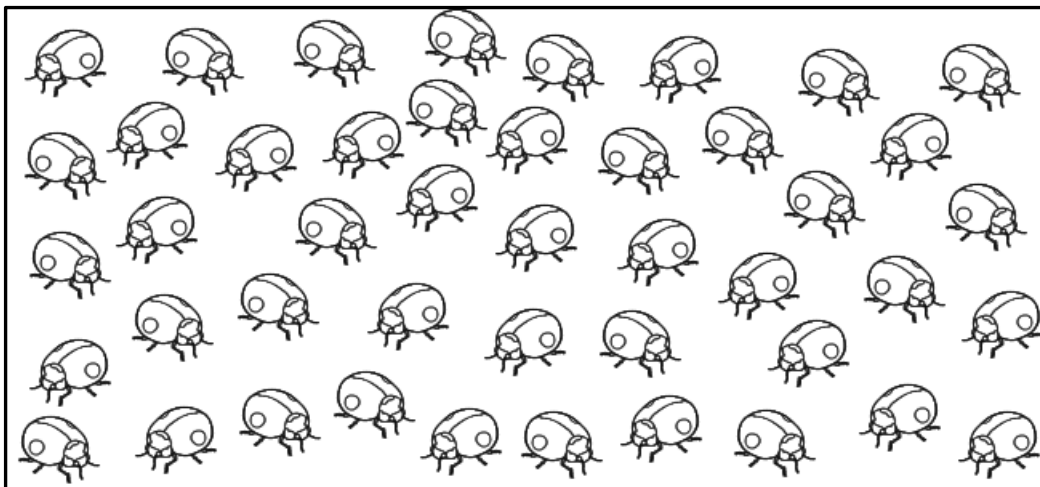
Then, circle groups of five ants and write the total number of ants here.



Show your work

Estimate how many ladybugs are in the box and write the number here.

Then, circle groups of five ladybugs and write the total number of ladybugs here.



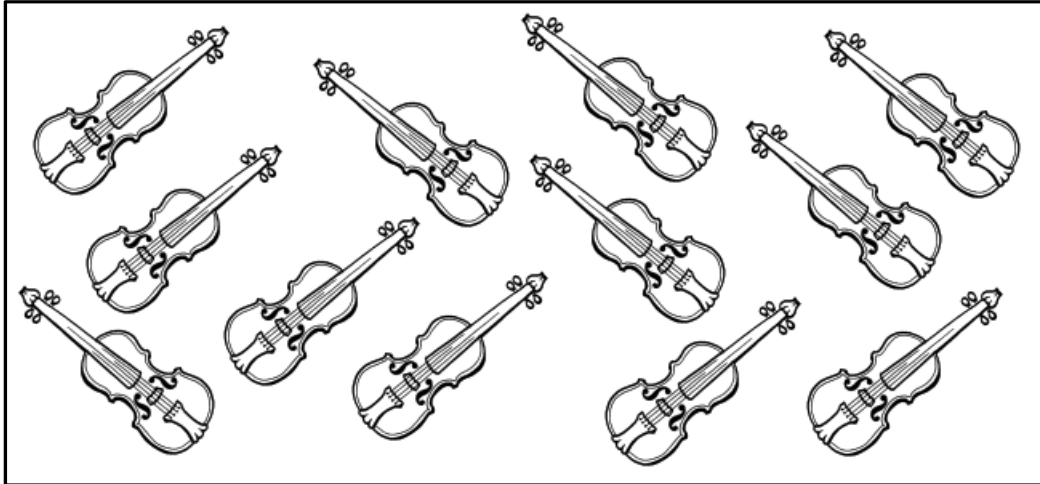
Show your work

Estimate and Check

Worksheet 2

Estimate how many violins are in the box and write the number here.

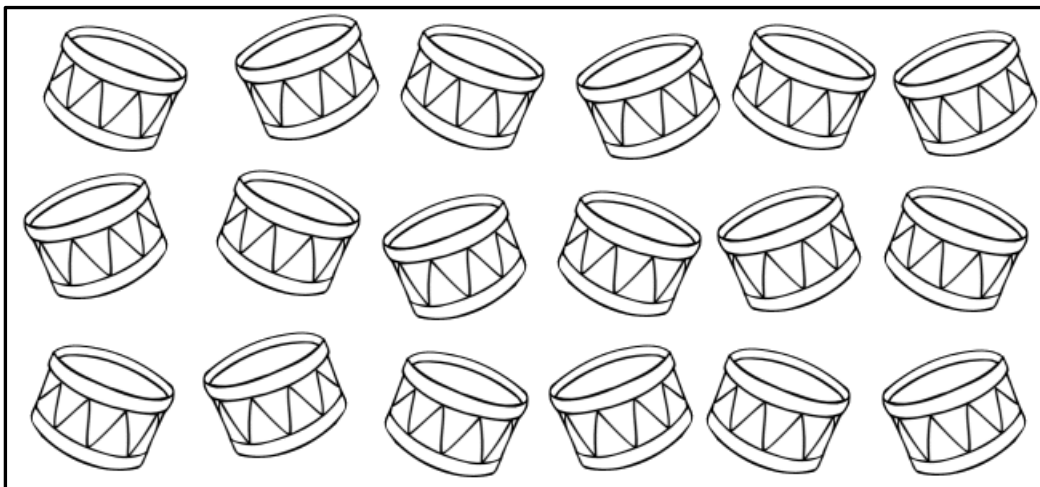
Then, circle groups of three violins and write the total number of violins here.



Show your work

Estimate how many drums are in the box and write the number here.

Then, circle groups of three drums and write the total number of drums here.




Show your work

Estimate and Check

Worksheet 3

Estimate how many squirrels are in the box and write the number here.

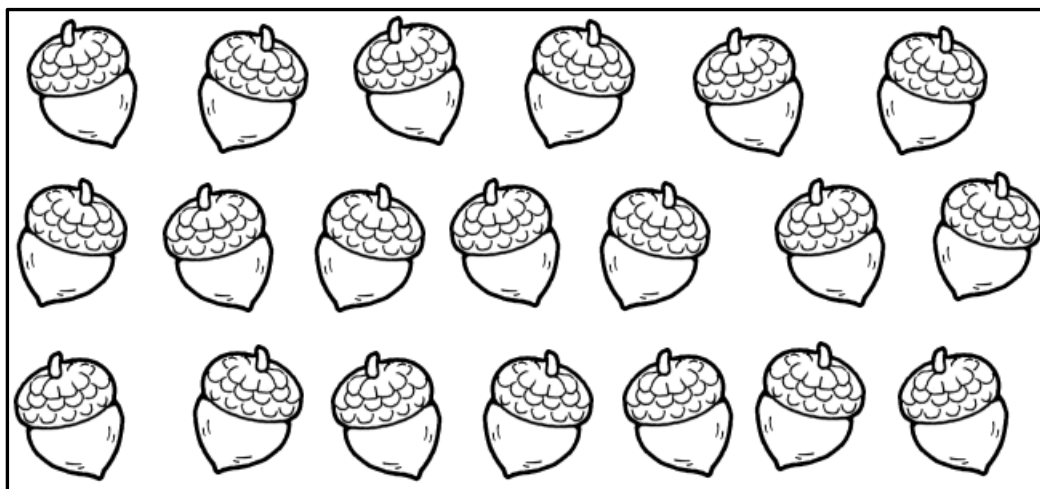
Then, circle sets of two squirrels and write the total number of squirrels here.



Show your work

Estimate how many acorns are in the box and write the number here.

Then, circle sets of two acorns and write the total number of acorns here.



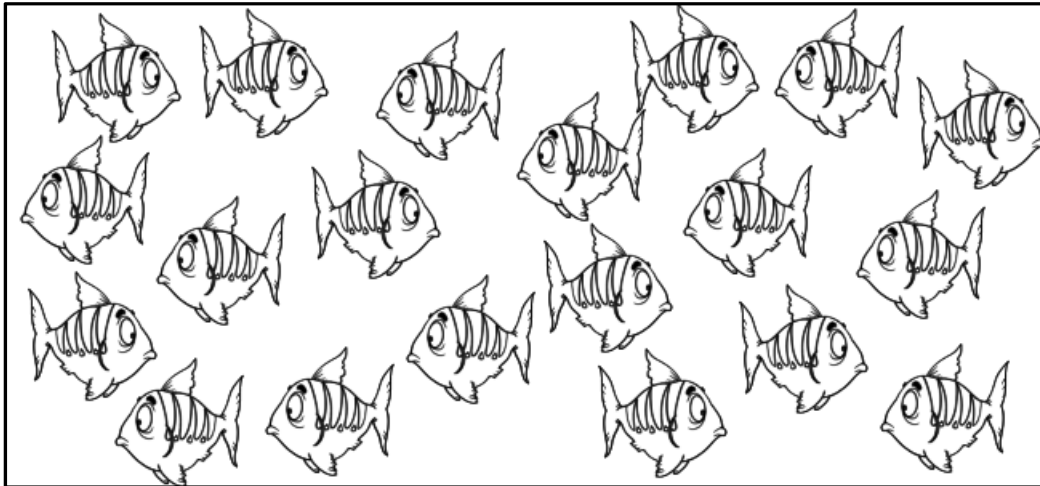
Show your work

Estimate and Check

Worksheet 4

Estimate how many fish are in the box and write the number here.

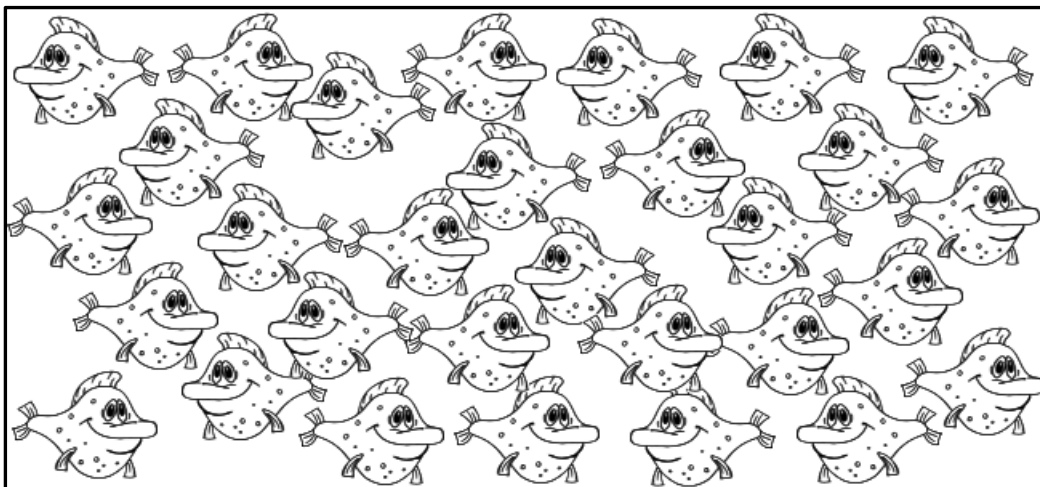
Then, circle groups of ten fish and write the total number of fish here.



Show your work

Estimate how many fish are in the box and write the number here.

Then, circle groups of ten fish and write the total number of fish here.



Show your work

These worksheets are appropriate for addition or multiplication practice.

Estimate and Check worksheet 2
Estimating and counting by 3's.

Name _____

Estimate and Check
worksheet 2

Estimates will vary.

Estimate how many violins are in the box and write the number here.

Then, circle groups of three violins and write the total number of violins here. **12**

Show your work

$3 \times 4 = 12$
or
 $\begin{array}{r} 3 \\ 3 \\ 3 \\ + 3 \\ \hline 12 \end{array}$

Estimates will vary.

Estimate how many drums are in the box and write the number here.

Then, circle groups of three drums and write the total number of drums here. **18**

Show your work

$3 \times 6 = 18$
or
 $\begin{array}{r} 3 \\ 3 \\ 3 \\ 3 \\ 3 \\ + 3 \\ \hline 18 \end{array}$

Copyright ©2011 T. Smith Publishing. All rights reserved. www.tlsbooks.com
Graphics ©2011 JupiterImages Corp.

Estimate and Check worksheet 1
Estimating and counting by 5's.

Name _____

Estimate and Check
worksheet 1

Estimates will vary.

Estimate how many ants are in the box and write the number here.

Then, circle groups of five ants and write the total number of ants here. **20**

Show your work

$5 + 5 + 5 + 5 = 20$
or
 $4 \times 5 = 20$

Estimates will vary.

Estimate how many ladybugs are in the box and write the number here.

Then, circle groups of five ladybugs and write the total number of ladybugs here. **45**

Show your work

$9 \times 5 = 45$
or
 $\begin{array}{r} 5 \\ 5 \\ 5 \\ 5 \\ 5 \\ 5 \\ 5 \\ + 5 \\ \hline 45 \end{array}$

Copyright ©2011 T. Smith Publishing. All rights reserved. www.tlsbooks.com
Graphics ©2011 JupiterImages Corp.

Estimate and Check worksheet 3
Estimating and counting by 2's.

Name _____

Estimate and Check
worksheet 3

Estimates will vary.

Estimate how many squirrels are in the box and write the number here.

Then, circle sets of two squirrels and write the total number of squirrels here. **12**

Show your work

$2 \times 6 = 12$
or
 $\begin{array}{r} 2 \\ 2 \\ 2 \\ 2 \\ 2 \\ + 2 \\ \hline 12 \end{array}$

Estimates will vary.

Estimate how many acorns are in the box and write the number here.

Then, circle sets of two acorns and write the total number of acorns here. **20**

Show your work

$2 \times 10 = 20$
or
 $\begin{array}{r} 2 \\ 2 \\ 2 \\ 2 \\ 2 \\ 2 \\ 2 \\ 2 \\ 2 \\ + 2 \\ \hline 20 \end{array}$

Copyright ©2011 T. Smith Publishing. All rights reserved. www.tlsbooks.com
Graphics ©2011 JupiterImages Corp.

Estimate and Check worksheet 4
Estimating and counting by 10's.

Name _____

Estimate and Check
worksheet 4

Estimates will vary.

Estimate how many fish are in the box and write the number here.

Then, circle groups of ten fish and write the total number of fish here. **20**

Show your work

$10 + 10 = 20$
or
 $10 \times 2 = 20$

Estimates will vary.

Estimate how many fish are in the box and write the number here.

Then, circle groups of ten fish and write the total number of fish here. **30**

Show your work

$10 + 10 + 10 = 30$
or
 $10 \times 3 = 30$

Copyright ©2011 T. Smith Publishing. All rights reserved. www.tlsbooks.com
Graphics ©2011 JupiterImages Corp.