


# Dinosaur Dots

Count the dots on each of the dinosaurs.


Write the number on the line.



\_\_\_\_\_

.....

\_\_\_\_\_



\_\_\_\_\_

.....

\_\_\_\_\_



\_\_\_\_\_

.....

\_\_\_\_\_



\_\_\_\_\_

.....

\_\_\_\_\_



\_\_\_\_\_


.....

\_\_\_\_\_


## Dinosaur Dots

Count the dots on each of the dinosaurs.

Write the number on the line.



11



13



15



12



14