



















Dime Store Math

You are the owner of the biggest dime store in your town. You purchase your merchandise in large quantities then repack the items in small packages for your customers. Using the information provided in each box, calculate how many packages will be available to your customers.

<p>1.  954 bandages</p> <p>18 bandages per package.</p> <p>How many packages will there be? _____</p>	<p>2.  204 party hats</p> <p>6 party hats per package.</p> <p>How many packages will there be? _____</p>	<p>3.  216 clip boards</p> <p>3 clip boards per package.</p> <p>How many packages will there be? _____</p>
<p>4.  392 hair bows</p> <p>7 hair bows per package.</p> <p>How many packages will there be? _____</p>	<p>5.  288 light bulbs</p> <p>4 light bulbs per package.</p> <p>How many packages will there be? _____</p>	<p>6.  1,152 diskettes</p> <p>12 diskettes per package.</p> <p>How many packages will there be? _____</p>
<p>7.  1,500 golf tees</p> <p>20 golf tees per package.</p> <p>How many packages will there be? _____</p>	<p>8.  36 wrenches</p> <p>2 wrenches per package.</p> <p>How many packages will there be? _____</p>	<p>9.  4,050 marbles</p> <p>50 marbles per package.</p> <p>How many packages will there be? _____</p>

Dime Store Math

You are the owner of the biggest dime store in your town. You purchase your merchandise in large quantities then repack the items in small packages for your customers. Using the information provided in each box, calculate how many packages will be available to your customers.

<p>1.  954 bandages</p> <p>18 bandages per package.</p> <p>How many packages will there be? _____</p> <p>53 packages.</p> <p>$954 \div 18 = 53$</p>	<p>2.  204 party hats</p> <p>6 party hats per package.</p> <p>How many packages will there be? _____</p> <p>34 packages.</p> <p>$204 \div 6 = 34$</p>	<p>3.  216 clip boards</p> <p>3 clip boards per package.</p> <p>How many packages will there be? _____</p> <p>72 packages.</p> <p>$216 \div 3 = 72$</p>
<p>4.  392 hair bows</p> <p>7 hair bows per package.</p> <p>How many packages will there be? _____</p> <p>56 packages.</p> <p>$392 \div 7 = 56$</p>	<p>5.  288 light bulbs</p> <p>4 light bulbs per package.</p> <p>How many packages will there be? _____</p> <p>72 packages.</p> <p>$288 \div 4 = 72$</p>	<p>6.  1,152 diskettes</p> <p>12 diskettes per package.</p> <p>How many packages will there be? _____</p> <p>96 packages.</p> <p>$1152 \div 12 = 96$</p>
<p>7.  1,500 golf tees</p> <p>20 golf tees per package.</p> <p>How many packages will there be? _____</p> <p>75 packages.</p> <p>$1500 \div 20 = 75$</p>	<p>8.  36 wrenches</p> <p>2 wrenches per package.</p> <p>How many packages will there be? _____</p> <p>18 packages.</p> <p>$36 \div 2 = 18$</p>	<p>9.  4,050 marbles</p> <p>50 marbles per package.</p> <p>How many packages will there be? _____</p> <p>81 packages.</p> <p>$4050 \div 50 = 81$</p>