

Counting Practice 4-7

Draw a circle around the numeral which tells how many in each group.



4 5 6 7




4 5 6 7



4 5 6 7



4 5 6 7




4 5 6 7



4 5 6 7

Counting Practice 4-7


Draw a circle around the numeral which tells how many in each group.



4 5 6 7




4 5 6 7



4 5 6 7



4 5 6 7



4 5 6 7



4 5 6 7