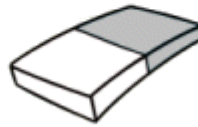




32¢



12¢




15¢

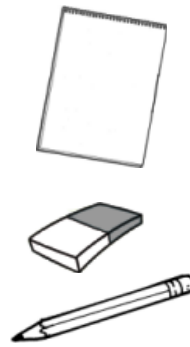


25¢


Find the cost of each set of items.




$$\begin{array}{r} 32¢ \\ 25¢ \\ + 15¢ \\ \hline 72¢ \end{array}$$



$$\begin{array}{r} ___¢ \\ ___¢ \\ + ___¢ \\ \hline ___¢ \end{array}$$



$$\begin{array}{r} ___¢ \\ ___¢ \\ + ___¢ \\ \hline ___¢ \end{array}$$



$$\begin{array}{r} ___¢ \\ ___¢ \\ + ___¢ \\ \hline ___¢ \end{array}$$



$$\begin{array}{r} ___¢ \\ ___¢ \\ + ___¢ \\ \hline ___¢ \end{array}$$



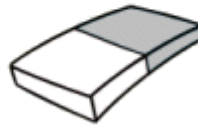
$$\begin{array}{r} ___¢ \\ ___¢ \\ + ___¢ \\ \hline ___¢ \end{array}$$



32¢



12¢




15¢

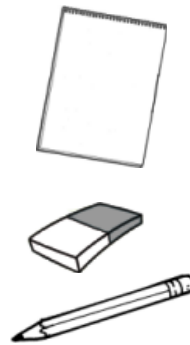


25¢


Find the cost of each set of items.



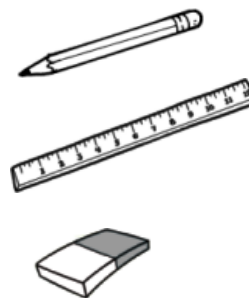
$$\begin{array}{r} 32¢ \\ 25¢ \\ + 15¢ \\ \hline 72¢ \end{array}$$



$$\begin{array}{r} 32¢ \\ 15¢ \\ + 12¢ \\ \hline 59¢ \end{array}$$



$$\begin{array}{r} 15¢ \\ 12¢ \\ + 12¢ \\ \hline 39¢ \end{array}$$



$$\begin{array}{r} 12¢ \\ 25¢ \\ + 15¢ \\ \hline 52¢ \end{array}$$



$$\begin{array}{r} 32¢ \\ 12¢ \\ + 25¢ \\ \hline 69¢ \end{array}$$



$$\begin{array}{r} 25¢ \\ 25¢ \\ + 25¢ \\ \hline 75¢ \end{array}$$