


Alien Addition

Find the sums.



$$\begin{array}{r} 5 \\ + 1 \\ \hline \square \end{array}$$



$$\begin{array}{r} 3 \\ + 2 \\ \hline \square \end{array}$$



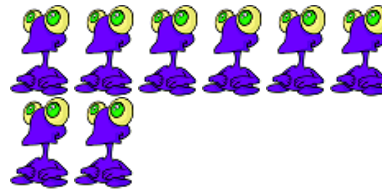
$$\begin{array}{r} 4 \\ + 4 \\ \hline \square \end{array}$$




$$\begin{array}{r} 1 \\ + 3 \\ \hline \square \end{array}$$




$$\begin{array}{r} 5 \\ + 3 \\ \hline \square \end{array}$$




$$\begin{array}{r} 6 \\ + 2 \\ \hline \square \end{array}$$



$$\begin{array}{r} 3 \\ + 7 \\ \hline \square \end{array}$$



$$\begin{array}{r} 2 \\ + 2 \\ \hline \square \end{array}$$



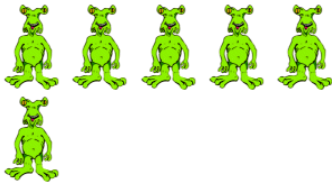
$$\begin{array}{r} 3 \\ + 4 \\ \hline \square \end{array}$$



$$\begin{array}{r} 4 \\ + 2 \\ \hline \square \end{array}$$

Alien Addition Answer Key

Find the sums.



$$\begin{array}{r} 5 \\ + 1 \\ \hline \boxed{6} \end{array}$$



$$\begin{array}{r} 3 \\ + 2 \\ \hline \boxed{5} \end{array}$$



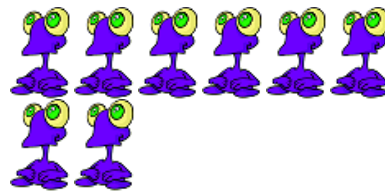
$$\begin{array}{r} 4 \\ + 4 \\ \hline \boxed{8} \end{array}$$



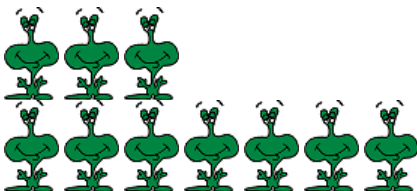
$$\begin{array}{r} 1 \\ + 3 \\ \hline \boxed{4} \end{array}$$




$$\begin{array}{r} 5 \\ + 3 \\ \hline \boxed{8} \end{array}$$




$$\begin{array}{r} 6 \\ + 2 \\ \hline \boxed{8} \end{array}$$



$$\begin{array}{r} 3 \\ + 7 \\ \hline \boxed{10} \end{array}$$



$$\begin{array}{r} 2 \\ + 2 \\ \hline \boxed{4} \end{array}$$



$$\begin{array}{r} 3 \\ + 4 \\ \hline \boxed{7} \end{array}$$



$$\begin{array}{r} 4 \\ + 2 \\ \hline \boxed{6} \end{array}$$