



Know Your Fractions


Draw a line from the portion of each shape to the appropriate fraction or whole number.




$\frac{3}{4}$



$\frac{1}{4}$



$\frac{1}{2}$



1

Draw a picture to represent each fraction or whole number.

$\frac{1}{2}$

$\frac{3}{4}$

$\frac{1}{4}$

1

Know Your Fractions

Draw a line from the portion of each shape to the appropriate fraction or whole number.

3/4
1/4
1/2
1

Draw a picture to represent each fraction or whole number.

$\frac{1}{2}$		$\frac{3}{4}$	
$\frac{1}{4}$		1	