



# Know Your Fractions

Draw a line from the portion of each shape to the appropriate fraction or whole number.




$\frac{1}{4}$



1



$\frac{3}{4}$



$\frac{1}{2}$

Draw a picture to represent each fraction or whole number.

$\frac{1}{2}$




$\frac{3}{4}$

$\frac{1}{4}$

1

# Know Your Fractions

Draw a line from the portion of each shape to the appropriate fraction or whole number.



$\frac{1}{4}$

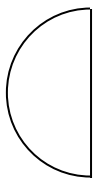
1

$\frac{3}{4}$

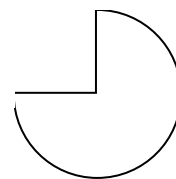
$\frac{1}{2}$

Draw a picture to represent each fraction or whole number.

$\frac{1}{2}$



$\frac{3}{4}$



$\frac{1}{4}$



1

