






Numbers that add to 3

Fill in the blanks on each burst to make addition facts for the number 3.



$0 + \square = 3$

$+ \text{ (3 turtles) } = 3$

$3 + \square = 3$

$\text{ (3 turtles) } + \square = 3$

$1 + \square = 3$

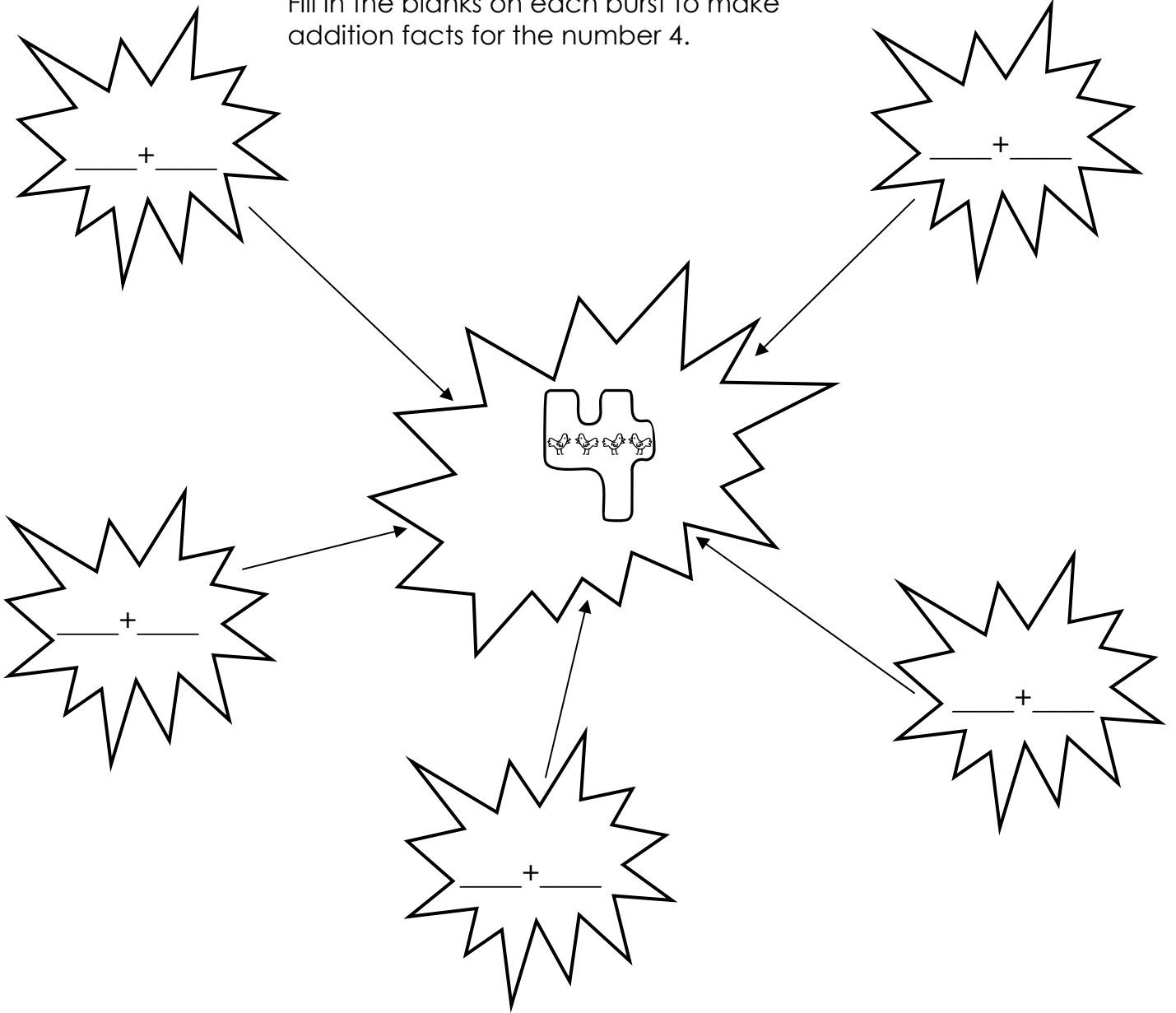
$\text{ (1 turtle) } + \text{ (2 turtles) } = 3$

$2 + \square = 3$

$\text{ (2 turtles) } + \text{ (1 turtle) } = 3$

Numbers that add to 4

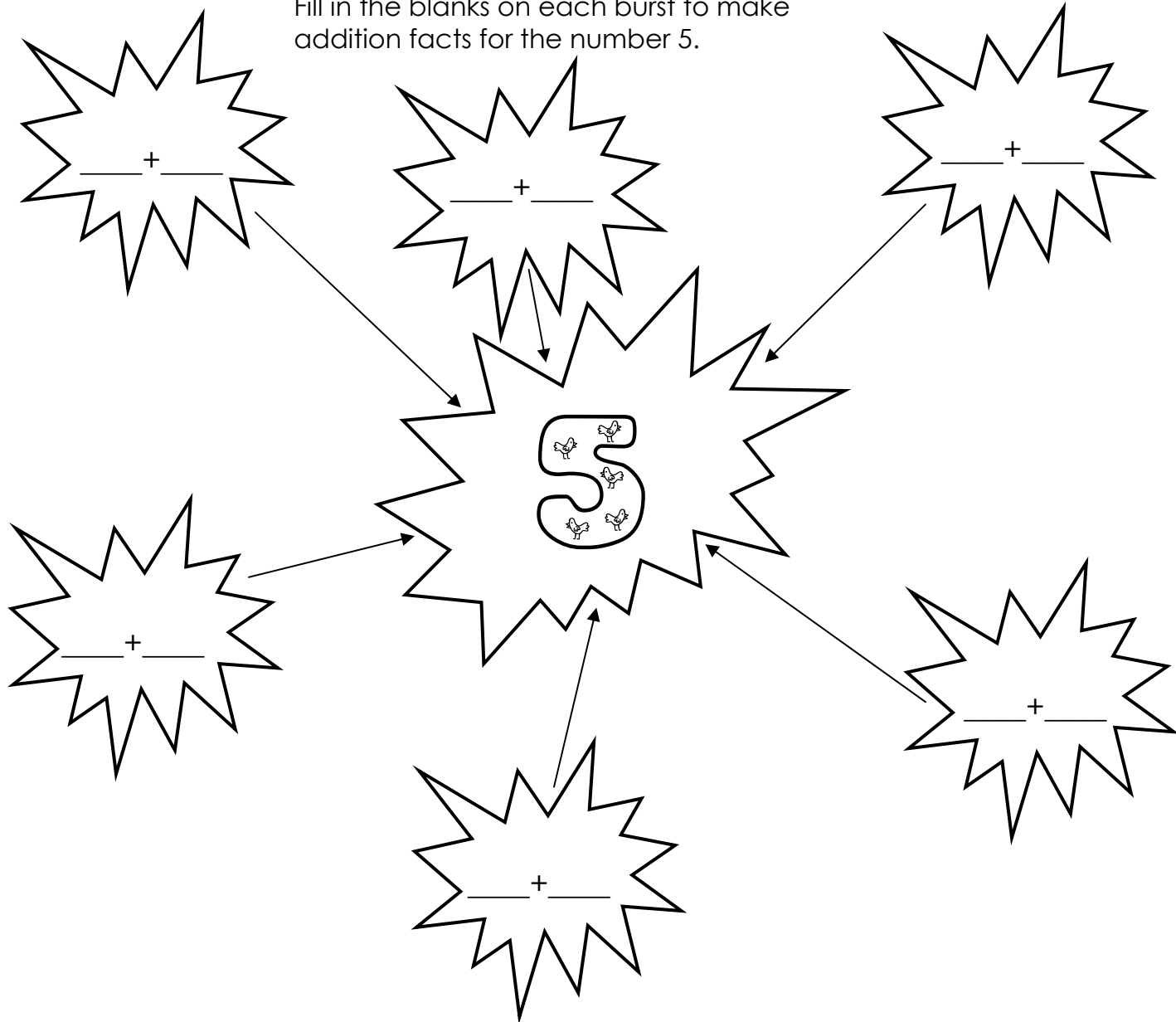
Fill in the blanks on each burst to make addition facts for the number 4.



$0 + \square = 4$	$+ \text{penguin} \text{penguin} \text{penguin} \text{penguin} = 4$	$4 + \square = 4$	$\text{penguin} \text{penguin} \text{penguin} \text{penguin} + \square = 4$
$1 + \square = 4$	$\text{penguin} + \text{penguin} \text{penguin} \text{penguin} = 4$	$3 + \square = 4$	$\text{penguin} \text{penguin} \text{penguin} + \text{penguin} = 4$
$2 + \square = 4$	$\text{penguin} \text{penguin} + \text{penguin} \text{penguin} = 4$		

Numbers that add to 5

Fill in the blanks on each burst to make addition facts for the number 5.



$0 + \square = 5$

$+ \text{○○○○○} = 5$

$5 + \square = 5$

$\text{○○○○○} + \square = 5$

$1 + \square = 5$

$\text{○} + \text{○○○○} = 5$

$4 + \square = 5$

$\text{○○○○} + \text{○} = 5$

$2 + \square = 5$

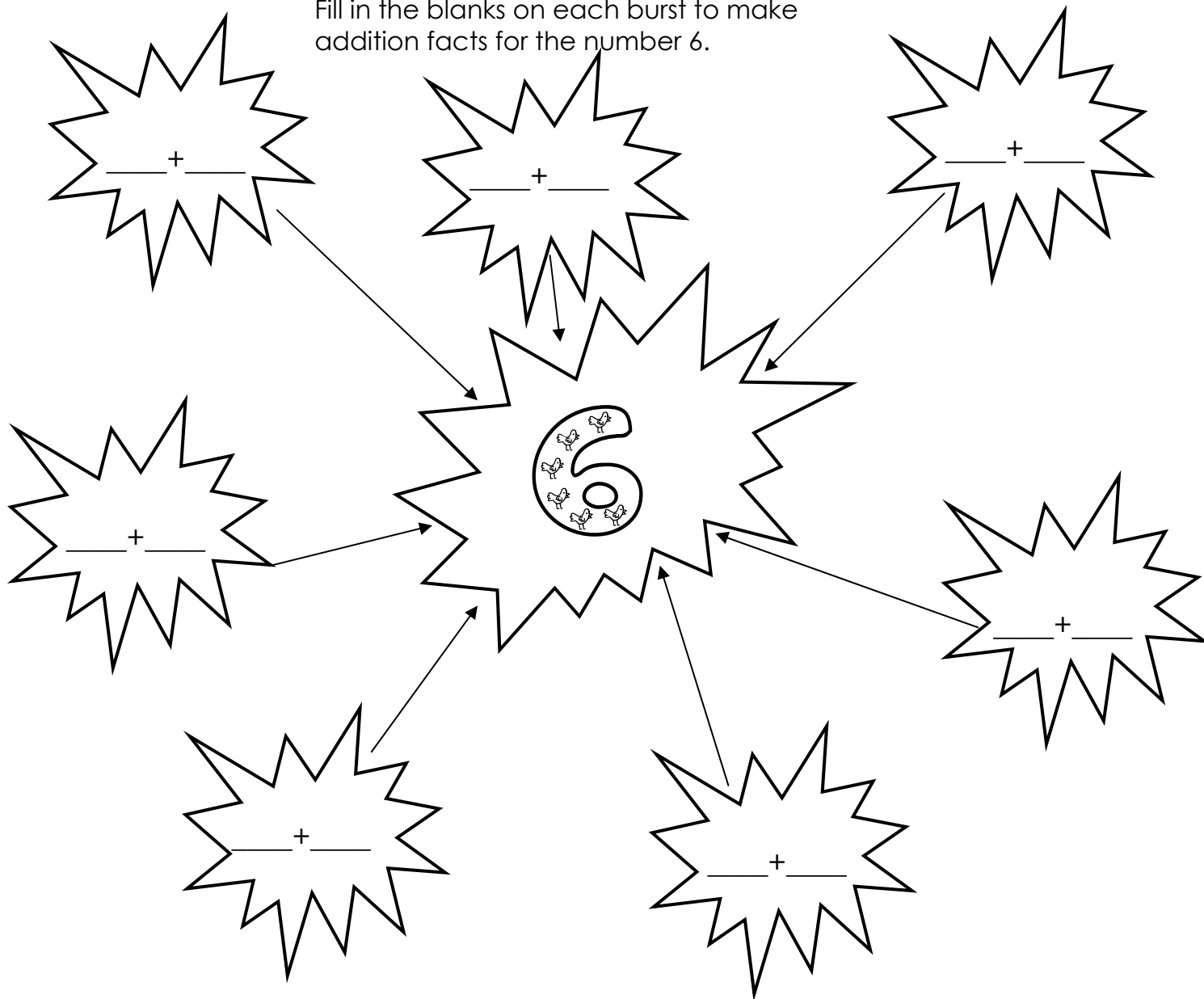
$\text{○○} + \text{○○○○} = 5$

$3 + \square = 5$

$\text{○○○} + \text{○○} = 5$

Numbers that add to 6

Fill in the blanks on each burst to make addition facts for the number 6.



$0 + \square = 6$

$+ \text{ (6 ducks) } = 6$

$6 + \square = 6$

$\text{ (6 ducks) } + \square = 6$

$1 + \square = 6$

$\text{ (1 duck) } + \text{ (5 ducks) } = 6$

$5 + \square = 6$

$\text{ (5 ducks) } + \text{ (1 duck) } = 6$

$2 + \square = 6$

$\text{ (2 ducks) } + \text{ (4 ducks) } = 6$

$4 + \square = 6$

$\text{ (4 ducks) } + \text{ (2 ducks) } = 6$

$3 + \square = 6$

$\text{ (3 ducks) } + \text{ (3 ducks) } = 6$

Addition facts graphic organizer answer keys

Name _____

Addition facts graphic organizer #3

Numbers that add to 3

Fill in the blanks on each burst to make addition facts for the number 3.

$0 + \boxed{3} = 3$	$+ \text{☼☼☼} = 3$	$3 + \boxed{0} = 3$	$\text{☼☼☼} + = 3$
$1 + \boxed{2} = 3$	$\text{☼} + \text{☼☼} = 3$	$2 + \boxed{1} = 3$	$\text{☼☼} + \text{☼} = 3$

Copyright ©2010 T. Smith Publishing. All rights reserved. www.tlsbooks.com

Graphics ©2010 JupiterImages Corp.

Numbers that add to 3

Name _____

Addition facts graphic organizer #4

Numbers that add to 4

Fill in the blanks on each burst to make addition facts for the number 4.

$0 + \boxed{4} = 4$	$+ \text{🐛🐛🐛🐛} = 4$	$4 + \boxed{0} = 4$	$\text{🐛🐛🐛🐛} + = 4$
$1 + \boxed{3} = 4$	$\text{🐛} + \text{🐛🐛🐛} = 4$	$3 + \boxed{1} = 4$	$\text{🐛🐛🐛} + \text{🐛} = 4$
$2 + \boxed{2} = 4$	$\text{🐛🐛} + \text{🐛🐛} = 4$		

Copyright ©2010 T. Smith Publishing. All rights reserved. www.tlsbooks.com

Graphics ©2010 JupiterImages Corp.

Numbers that add to 4

Name _____

Addition facts graphic organizer #5

Numbers that add to 5

Fill in the blanks on each burst to make addition facts for the number 5.

$0 + \boxed{5} = 5$	$+ \text{🐛🐛🐛🐛🐛} = 5$	$5 + \boxed{0} = 5$	$\text{🐛🐛🐛🐛🐛} + = 5$
$1 + \boxed{4} = 5$	$\text{🐛} + \text{🐛🐛🐛🐛} = 5$	$4 + \boxed{1} = 5$	$\text{🐛🐛🐛🐛} + \text{🐛} = 5$
$2 + \boxed{3} = 5$	$\text{🐛🐛} + \text{🐛🐛🐛} = 5$	$3 + \boxed{2} = 5$	$\text{🐛🐛🐛} + \text{🐛🐛} = 5$

Copyright ©2010 T. Smith Publishing. All rights reserved. www.tlsbooks.com

Graphics ©2010 JupiterImages Corp.

Numbers that add to 5

Name _____

Addition facts graphic organizer #6

Numbers that add to 6

Fill in the blanks on each burst to make addition facts for the number 6.

$0 + \boxed{6} = 6$	$+ \text{🐛🐛🐛🐛🐛🐛} = 6$	$6 + \boxed{0} = 6$	$\text{🐛🐛🐛🐛🐛🐛} + = 6$
$1 + \boxed{5} = 6$	$\text{🐛} + \text{🐛🐛🐛🐛🐛} = 6$	$5 + \boxed{1} = 6$	$\text{🐛🐛🐛🐛🐛} + \text{🐛} = 6$
$2 + \boxed{4} = 6$	$\text{🐛🐛} + \text{🐛🐛🐛🐛} = 6$	$4 + \boxed{2} = 6$	$\text{🐛🐛🐛🐛} + \text{🐛🐛} = 6$
$3 + \boxed{3} = 6$	$\text{🐛🐛🐛} + \text{🐛🐛🐛} = 6$		

Copyright ©2010 T. Smith Publishing. All rights reserved. www.tlsbooks.com

Graphics ©2010 JupiterImages Corp.

Numbers that add to 6